

MH-CET Response Sheet

Total Questions: 200

Q1 | ID: 202871 | Section: LOGICAL REASONING

Question:

Select the option that is related to the third word in the same way as the second word is related to the first word:

Currency: Inflation :: Metal : ?

Options:

Option ID: 311991 Hunger

Option ID: 311992 Disease

Option ID: 311993 Rust

Option ID: 311994 Fuel

Option ID: 311995 Recycling

Correct Option: 311993

Candidate Response:

Q2 | ID: 202872 | Section: LOGICAL REASONING

Question:

Choose the analogy that best matches the example provided:

Potter : Vase

- A) Author : Idea
- B) Carpenter : Chair
- C) Painter : Brush
- D) Chef : Recipe
- E) Sculptor : Marble

Options:

Option ID: 311996 A

Option ID: 311997 B

Option ID: 311998 C

Option ID: 311999 D

Option ID: 312000 E



Trusted for Success

Correct Option: 311997

Candidate Response:

Q3 | ID: 202873 | Section: LOGICAL REASONING

Question:

Select the option that completes the number analogy.

18 : 441 :: 21 : 576 :: 24 : ?

Options:

Option ID: 312001 564

Option ID: 312002 478

Option ID: 312003 729

Option ID: 312004 446

Option ID: 312005 676



Trusted for Success

Correct Option: 312003

Candidate Response:

Q4 | ID: 202874 | Section: LOGICAL REASONING

Question:

Select the option in which the numbers follow the same relationship as in the given set.

40 : 49 : 22

Options:

Option ID: 312006 31 : 41 : 21

Option ID: 312007 35 : 47 : 28

Option ID: 312008 45 : 56 : 22

Option ID: 312009 27 : 37 : 12

Option ID: 312010 42 : 51 : 24



Trusted for Success

Correct Option: 312010

Candidate Response:

Q5 | ID: 202875 | Section: LOGICAL REASONING

Question:

Select the option that is related to the third word in the same way as the second word is related to the first word:

Democracy : Ballot :: Monarchy : ?

Options:

Option ID: 312011 Justice

Option ID: 312012 Charity

Option ID: 312013 Help

Option ID: 312014 Crown

Option ID: 312015 Borrow



Trusted for Success

Correct Option: 312014

Candidate Response:

Q6 | ID: 202876 | Section: LOGICAL REASONING

Question:

In the following question, find the odd letters/group from the given alternatives.

- A) WTYX
- B) KHML
- C) PMRQ
- D) GDIH
- E) TPWU

Options:

Option ID: 312016 A

Option ID: 312017 B

Option ID: 312018 C

Option ID: 312019 D

Option ID: 312020 E

Correct Option: 312020

Candidate Response:



Trusted for Success

Question:

Find the odd one out:

- A) Inch
- B) Foot
- C) Yard
- D) Mile
- E) Acre

Options:

Option ID: 312021 A

Option ID: 312022 B

Option ID: 312023 C

Option ID: 312024 D

Option ID: 312025 E

Correct Option: 312025

Candidate Response:



Trusted for Success

Q8 | ID: 202878 | Section: LOGICAL REASONING

Question:

Which pair does NOT belong with the others?

A. 12 – 84

B. 36 – 62

C. 48 – 72

D. 84 – 96

E. 24 – 48

Options:

Option ID: 312026 A

Option ID: 312027 B

Option ID: 312028 C

Option ID: 312029 D

Option ID: 312030 E

Correct Option: 312027

Candidate Response:



Trusted for Success

Q9 | ID: 202879 | Section: LOGICAL REASONING

Question:

Choose the number which is DIFFERENT from the rest?

A. 3727

B. 4668

C. 5847

D. 5364

E. 6745

Options:

Option ID: 312031 A

Option ID: 312032 B

Option ID: 312033 C

Option ID: 312034 D

Option ID: 312035 E

Correct Option: 312031

Candidate Response:



Trusted for Success

Q10 | ID: 202880 | Section: LOGICAL REASONING

Question:

Rajesh walks 15 km towards North. He turns right and walks another 15 km. He turns right and walks another 15 km. In which direction is he with respect to the starting point?

Options:

Option ID: 312036 North

Option ID: 312037 North-west

Option ID: 312038 West

Option ID: 312039 South

Option ID: 312040 East



Trusted for Success

Correct Option: 312040

Candidate Response:

Q11 | ID: 202881 | Section: LOGICAL REASONING

Question:

Find the odd one out:

17, 19, 23, 29, 31

Options:

Option ID: 312041 17

Option ID: 312042 19

Option ID: 312043 23

Option ID: 312044 29

Option ID: 312045 31



Trusted for Success

Correct Option: 312045

Candidate Response:

Q12 | ID: 202882 | Section: LOGICAL REASONING

Question:

Find the missing number in the series:

11, 19, 31, 43, __, 71

Options:

Option ID: 312046 47

Option ID: 312047 53

Option ID: 312048 59

Option ID: 312049 71

Option ID: 312050 67



Trusted for Success

Correct Option: 312048

Candidate Response:

Q13 | ID: 202883 | Section: LOGICAL REASONING

Question:

Complete the series

1, 2, 6, 24, 120, ?

Options:

Option ID: 312051 720

Option ID: 312052 600

Option ID: 312053 687

Option ID: 312054 268

Option ID: 312055 432



Trusted for Success

Correct Option: 312051

Candidate Response:

Q14 | ID: 202884 | Section: LOGICAL REASONING

Question:

Complete the series

2 Z 5, 7 Y 7, 14 X 9, 23 W 11, 34 V 13, ?

Options:

Option ID: 312056 37 Y 16

Option ID: 312057 47 U 15

Option ID: 312058 40 H 12

Option ID: 312059 45 U 17

Option ID: 312060 43 X 14



Trusted for Success

Correct Option: 312057

Candidate Response:

Q15 | ID: 202885 | Section: LOGICAL REASONING

Question:

What comes next in the series:

50, B, 210, F, 380, J, 460, ..., ...?

Options:

Option ID: 312061 H, 510

Option ID: 312062 Q, 500

Option ID: 312063 V, 480

Option ID: 312064 N, 550

Option ID: 312065 U, 525



Trusted for Success

Correct Option: 312064

Candidate Response:

Q16 | ID: 202886 | Section: LOGICAL REASONING

Question:

Find the missing number in the series:

94, 99, 108, 119, 130, ?, 144

Options:

Option ID: 312066 128

Option ID: 312067 135

Option ID: 312068 139

Option ID: 312069 140

Option ID: 312070 132



Trusted for Success

Correct Option: 312068

Candidate Response:

Q17 | ID: 202887 | Section: LOGICAL REASONING

Question:

Ram is facing west. He turns 45° clockwise, 135° counter clockwise, and 135° counter clockwise again. Which direction is he now facing?

Options:

Option ID: 312071 North-West.

Option ID: 312072 North-East

Option ID: 312073 South-East

Option ID: 312074 South-West

Option ID: 312075 South

Correct Option: 312072

Candidate Response:



Trusted for Success

Q18 | ID: 202888 | Section: LOGICAL REASONING

Question:

A person facing South-West turns and faces East. In the same way, if a person facing North-East turns, which direction will she face?

Options:

Option ID: 312076 South

Option ID: 312077 East

Option ID: 312078 West

Option ID: 312079 North

Option ID: 312080 North-West



Trusted for Success

Correct Option: 312078

Candidate Response:

Q19 | ID: 202889 | Section: LOGICAL REASONING

Question:

Mahesh is facing North and walks 10kms. He turns 270° anti-clockwise and walks 15kms. Now, he again turns 45° clockwise and walks for 25kms. Which direction is he facing now?

Options:

Option ID: 312081 North-east

Option ID: 312082 South-east

Option ID: 312083 South-west

Option ID: 312084 North-west

Option ID: 312085 South



Trusted for Success

Correct Option: 312082

Candidate Response:

Q20 | ID: 202890 | Section: LOGICAL REASONING

Question:

Rohit starts from a point A and travels 3 km eastwards to B and then turns left and travels thrice that distance to reach C. He again turns left and travels five times the distance he covered between A and B and reaches his destination D. What is the shortest distance between the starting point and the destination ?

Options:

Option ID: 312086 15 km

Option ID: 312087 20 km

Option ID: 312088 25 km

Option ID: 312089 18 km

Option ID: 312090 19 km



Trusted for Success

Correct Option: 312086

Candidate Response:

Q21 | ID: 202891 | Section: LOGICAL REASONING

Question:

Savita is mother-in-law of Eashita who is sister-in-law of Aniket. Pranjal is father of Sanjeev, the only brother of Aniket. How is Savita related to Aniket?

Options:

Option ID: 312091 Mother

Option ID: 312092 Mother-in -law

Option ID: 312093 Daughter

Option ID: 312094 Sister

Option ID: 312095 Niece

Correct Option: 312091

Candidate Response:



Trusted for Success

Q22 | ID: 202892 | Section: LOGICAL REASONING

Question:

If Aruna is the sister of Babita, Babita is the daughter of Chitra, and Chitra is the wife of Dinesh, how is Dinesh related to Aruna?

Options:

Option ID: 312096 Uncle

Option ID: 312097 Son-in-law

Option ID: 312098 Father-in-law

Option ID: 312099 Father

Option ID: 312100 Nephew



Trusted for Success

Correct Option: 312099

Candidate Response:

Q23 | ID: 202893 | Section: LOGICAL REASONING

Question:

Looking at the photo of a man. David said, "His mother is the wife of my father's son. Brothers and sisters I have none". Whose photo was David looking at?

Options:

Option ID: 312101 His uncle

Option ID: 312102 His nephew

Option ID: 312103 His son

Option ID: 312104 His cousin

Option ID: 312105 His Father-in-law

Correct Option: 312103

Candidate Response:



Trusted for Success

Q24 | ID: 202894 | Section: LOGICAL REASONING

Question:

Pointing to Tanya, a woman says,
"She is the daughter of the only brother of the only daughter of my father."
How is Tanya related to the woman?

Options:

Option ID: 312106 Mother

Option ID: 312107 Sister

Option ID: 312108 Niece

Option ID: 312109 Cousin sister

Option ID: 312110 Aunt



Trusted for Success

Correct Option: 312108

Candidate Response:

Q25 | ID: 202895 | Section: LOGICAL REASONING

Question:

If Ajit is the brother of Balaji, Balaji is the son of Chaya, Chaya is the daughter of Diya, and Diya is the wife of Eknath, how is Eknath related to Balaji?

Options:

Option ID: 312111 Uncle

Option ID: 312112 Father

Option ID: 312113 Grandfather

Option ID: 312114 Mother

Option ID: 312115 Grandmother

Correct Option: 312113

Candidate Response:



Trusted for Success

Q26 | ID: 202896 | Section: LOGICAL REASONING

Question:

In a single row of 54 persons, Manoj is seated 35th from the left end and Suraj is seated 22nd from the right end. How many persons are seated between Manoj and Suraj?

Options:

Option ID: 312116 4

Option ID: 312117 6

Option ID: 312118 2

Option ID: 312119 5

Option ID: 312120 1



Trusted for Success

Correct Option: 312120

Candidate Response:

Question:

In these question, relationship between different elements is shown in the statements. Some statements are followed by some conclusions. Choose the correct answer on the basis of information given below.

Statements:

I: $H \geq V = O > R$

II: $X \leq D > Y > R$

III: $Y > N = L < Z$

Conclusions:

I. $O < D$

II. $R > N$

A. Neither conclusion I nor II follows.

B. Only conclusion I follows.

C. Both conclusions I and II follow.

D. Only conclusion II follows.

E. Either conclusion I or II follows.



Options:

Option ID: 312121 A

Trusted for Success

Option ID: 312122 B

Option ID: 312123 C

Option ID: 312124 D

Option ID: 312125 E

Correct Option: 312121

Candidate Response:

Q28 | ID: 202898 | Section: LOGICAL REASONING

Question:

The digits of the number 694128573 are rearranged in ascending order within the number.

How many digits will remain in their original positions after the rearrangement?

Options:

Option ID: 312126 0

Option ID: 312127 3

Option ID: 312128 1

Option ID: 312129 4

Option ID: 312130 5



Trusted for Success

Correct Option: 312126

Candidate Response:

Q29 | ID: 202899 | Section: LOGICAL REASONING

Question:

There are 25 persons in a row.
Rahul is 10th from the left.
Five persons sitting to the left of Rahul leave the row.
What is Rahul's new position from the right end?

Options:

Option ID: 312131 17th

Option ID: 312132 9th

Option ID: 312133 16th

Option ID: 312134 11th

Option ID: 312135 7th



Trusted for Success

Correct Option: 312133

Candidate Response:

Q30 | ID: 202900 | Section: LOGICAL REASONING

Question:

Three persons Amey, Bhavan and Charan are standing in a queue. There are 5 people between Amey and Bhavan and 8 people between Bhavan and Charan. If there are three people ahead of Charan and 21 people behind Amey, then what could be the minimum number of persons in the queue?

Options:

Option ID: 312136 38

Option ID: 312137 35

Option ID: 312138 23

Option ID: 312139 32

Option ID: 312140 28



Trusted for Success

Correct Option: 312140

Candidate Response:

Question:

In the word **"ANALYTICS"**:

- Letters at odd positions are changed to the letter two steps forward in the English alphabetical series,
- Letters at even positions are changed to the letter one step backward in the English alphabetical series,
- After this change, the letters at positions which are perfect squares are interchanged with the letters immediately following them.

After performing all the above operations, determine the alphabets that shall appear between the third and the seventh alphabets of the newly formed word, when compared to the alphabets that appear in an ordinary English dictionary.

Options:

Option ID: 312141 8

Option ID: 312142 5

Option ID: 312143 7

Option ID: 312144 9

Option ID: 312145 4

Correct Option: 312143

Candidate Response:

Q32 | ID: 202902 | Section: LOGICAL REASONING

Question:

If all the alphabets of the word UNIDENTIFIED are arranged in an alphabetical order, then the position of how many alphabets shall remain unchanged in the newly formed word?

Options:

Option ID: 312146 3

Option ID: 312147 2

Option ID: 312148 1

Option ID: 312149 4

Option ID: 312150 5



Trusted for Success

Correct Option: 312148

Candidate Response:

Q33 | ID: 202903 | Section: LOGICAL REASONING

Question:

If in the word SEPTUAGENARIAN first three and then next three letters are written in reverse order and the rest of the letters are written as they appear in English alphabet, the positions of how many letters get changed in the new arrangement?

Options:

Option ID: 312151 10

Option ID: 312152 8

Option ID: 312153 9

Option ID: 312154 11

Option ID: 312155 12



Trusted for Success

Correct Option: 312155

Candidate Response:

Q34 | ID: 202904 | Section: LOGICAL REASONING

Question:

Each consonant of the word **"EDUCATION"** is changed to the next alphabet in the English alphabet and each vowel is changed to the previous alphabet.

If the new alphabets are arranged in alphabetical order, which alphabet will be the 4th from the left end?

Options:

Option ID: 312156 N

Option ID: 312157 U

Option ID: 312158 H

Option ID: 312159 E

Option ID: 312160 O



Trusted for Success

Correct Option: 312158

Candidate Response:

Q35 | ID: 202905 | Section: LOGICAL REASONING

Question:

How many meaningful four letter English word (s) can be formed by using the first and fifth alphabet of the word BARBER along with the second and sixth alphabet of the word PARKING, such that each alphabet gets used at least once in the newly formed word (s)?

Options:

Option ID: 312161 3

Option ID: 312162 1

Option ID: 312163 4

Option ID: 312164 2

Option ID: 312165 5

Correct Option: 312164

Candidate Response:



Trusted for Success

Q36 | ID: 202906 | Section: LOGICAL REASONING

Question:

If MONKEY → PRQOACY, how will ELEPHANT be coded in the same language?

Options:

Option ID: 312166 HTGQGGWL

Option ID: 312167 HQGTGGLW

Option ID: 312168 HGQTGGLW

Option ID: 312169 HQGTGQWL

Option ID: 312170 HTGQGGWL

Correct Option: 312167

Candidate Response:

Trusted for Success

Q37 | ID: 202907 | Section: LOGICAL REASONING

Question:

A puzzle club assigns unique codes to animals. For instance, HORSE is represented as **1620363810**, What code would they assign to RHINOCEROS?

Options:

Option ID: 312171 6316142820160362028

Option ID: 312172 3616182824610352038

Option ID: 312173 3616142820610362038

Option ID: 312174 5616162821610762038

Option ID: 312175 3686142870610364038

Correct Option: 312173

Candidate Response:



Trusted for Success

Q38 | ID: 202908 | Section: LOGICAL REASONING

Question:

If **BRIGHT** = 150, then **SHADOW** = ?

Options:

Option ID: 312176 195

Option ID: 312177 251

Option ID: 312178 243.5

Option ID: 312179 201.5

Option ID: 312180 212.8

Correct Option: 312179

Candidate Response:



Trusted for Success

Q39 | ID: 202909 | Section: LOGICAL REASONING

Question:

In a certain code, 'GONE' is written as 5 % 2 # and 'MEDAL' is written as 4 # 3 \$ @, then how will 'GOLD' be written in that code?

Options:

Option ID: 312181 5 @ % 3

Option ID: 312182 5 % @ 3

Option ID: 312183 5 # @ 3

Option ID: 312184 5 % # 3

Option ID: 312185 5 # % 3

Correct Option: 312182

Candidate Response:



Trusted for Success

Q40 | ID: 202910 | Section: LOGICAL REASONING

Question:

If PLANET is coded as NKYBVR and GARDEN is coded as EZNVBK, what will MARKET be coded as?

Options:

Option ID: 312186 KZNVQX

Option ID: 312187 KZNCVQ

Option ID: 312188 KZNVPR

Option ID: 312189 KZNYCQ

Option ID: 312190 KZEARQ



Trusted for Success

Correct Option: 312187

Candidate Response:

Q41 | ID: 202911 | Section: LOGICAL REASONING

Question:

There are 200 students in a particular class. 50% students play cricket, 20% student play football and 10% students play both the games. What is the number of students who play neither cricket nor football?

Options:

Option ID: 312191 150

Option ID: 312192 130

Option ID: 312193 80

Option ID: 312194 135

Option ID: 312195 140



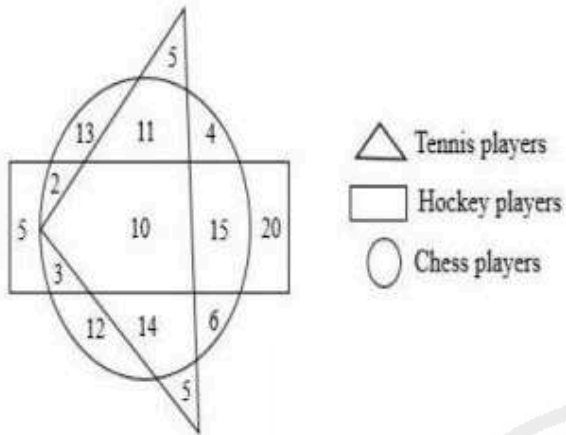
Trusted for Success

Correct Option: 312193

Candidate Response:

Question:

Study the Diagram shown below carefully and answer the question that follows :



How many tennis players are not hockey players?

Options:

Option ID: 312196 35

Option ID: 312197 56

Option ID: 312198 37

Option ID: 312199 29

Option ID: 312200 45

Correct Option: 312196

Candidate Response:

Q43 | ID: 202913 | Section: LOGICAL REASONING

Question:

From a supermarket, 15 customers bought orange, 15 bought watermelon, 20 bought blueberry, 2 bought all the three fruits and 8 bought at least two of these. How many bought at least one fruit from the supermarket?

Options:

Option ID: 312201 43

Option ID: 312202 42

Option ID: 312203 38

Option ID: 312204 40

Option ID: 312205 45



Trusted for Success

Correct Option: 312204

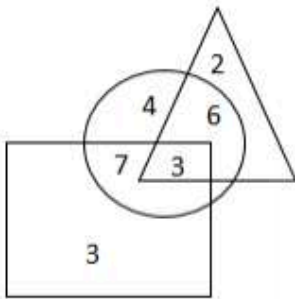
Candidate Response:

Q44 | ID: 202914 | Section: LOGICAL REASONING

Question:

In the given Venn diagram, the 'circle' represents the number of students passing in maths, the 'triangle' represents the number of students passing in science, and the 'rectangle' represents the number of students passing in history.

Identify the number of students passing in science only in the given diagram :



Options:

Option ID: 312206 6

Option ID: 312207 2

Option ID: 312208 3

Option ID: 312209 7

Option ID: 312210 4

Correct Option: 312207

Candidate Response:



Trusted for Success

Q45 | ID: 202915 | Section: LOGICAL REASONING

Question:

Out of the 100 players, 20 people love only football, 30 people love both football and hockey, 15 people love only cricket, 25 people love only hockey, 5 people love both football and cricket and the remaining love only basketball. How many players like football?

Options:

Option ID: 312211 35

Option ID: 312212 20

Option ID: 312213 25

Option ID: 312214 55

Option ID: 312215 60



Trusted for Success

Correct Option: 312214

Candidate Response:

Q46 | ID: 202916 | Section: LOGICAL REASONING

Question:

Lata is elder than Meera. Lalita is elder than Meera but younger than Lata. Lila is younger than both Meera and Hema but Hema is younger than Meera. Who is the youngest?

Options:

Option ID: 312216 Lata

Option ID: 312217 Lalita

Option ID: 312218 Hema

Option ID: 312219 Lila

Option ID: 312220 Meera



Trusted for Success

Correct Option: 312219

Candidate Response:

Q47 | ID: 202917 | Section: LOGICAL REASONING

Question:

Priya scored more than Raju, Yamini scored as much as Diya. Laxmi scored less than Manisha. Raju scored more than Yamini. Manisha scored less than Diya. Who scored the lowest?

Options:

Option ID: 312221 Laxmi

Option ID: 312222 Raju

Option ID: 312223 Manisha

Option ID: 312224 Yamini

Option ID: 312225 Diya



Trusted for Success

Correct Option: 312221

Candidate Response:

Q48 | ID: 202918 | Section: LOGICAL REASONING

Question:

Read the given information and answer the question given below carefully.

Eight people named from A to H sit along a straight row and are facing north direction. Less than two people sit to the left of H. G sits in the middle of H and F but is not an immediate neighbour of either of the two. C sits second to the right of B, who is an immediate neighbour of H. D sits immediately between F and A. E is neither an immediate neighbour of G nor of A.

How many people sit(s) to the left of G?

Options:

Option ID: 312226 1

Option ID: 312227 2

Option ID: 312228 3

Option ID: 312229 4

Option ID: 312230 5



Trusted for Success

Correct Option: 312228

Candidate Response:

Q49 | ID: 202919 | Section: LOGICAL REASONING

Question:

Five girls are sitting on a bench to be photographed, all facing North. Kajal is to the left of Aakansha. Divya is to the right of Aakansha. Anita is between Aakansha and Divya. Lila is to the left of Kajal. Who would be third from the right in the photograph?

Options:

Option ID: 312231 Lila

Option ID: 312232 Divya

Option ID: 312233 Aakansha

Option ID: 312234 Anita

Option ID: 312235 Kajal



Trusted for Success

Correct Option: 312233

Candidate Response:

Q50 | ID: 202920 | Section: LOGICAL REASONING

Question:

There are six persons sitting in a row facing north. Ajit is sitting towards immediate left of Bhola and immediate right of Chetan. Chetan is sitting to immediate right of Firoj. Dilip is immediate right of Eknath who is to the left of Firoj, then which two people are sitting in the center?

Options:

Option ID: 312236 Dilip and Bhola

Option ID: 312237 Ajit and Bhola

Option ID: 312238 Firoj and Chetan

Option ID: 312239 Eknath and Dilip

Option ID: 312240 Dilip and Chetan



Trusted for Success

Correct Option: 312238

Candidate Response:

Q51 | ID: 202921 | Section: LOGICAL REASONING

Question:

Study the following information carefully and answer the given question:

A word and number arrangement device when given an input line of words and numbers rearranges them following a particular pattern in each step. The following is an illustration of input and rearrangement.

Input: 18 Quickly Teacher Pacer 40 28 86 Heaven

Step 1: Heave Quickl Teache Pace 40 28 86 18

Step 2: Heave 18 Quickl Teache Pace 40 28 86

Step 3: Heav 18 Pac 28 Quick Teach 40 86

Step 4: Hea 18 Pa 28 Quic 40 Teac 86

Step 5: He 18 P 28 Qui 40 Tea 86

And Step 5 is the last step of the above input.

As per the pattern followed in the above steps, find out in each of the following questions the appropriate step for the given input.

Input: 20 Quicker towel Parker 41 29 87 Harness

Which of the following will be the last step of the rearrangement?

Options:

Option ID: 312241 3

Option ID: 312242 4

Option ID: 312243 5

Option ID: 312244 6

Option ID: 312245 7

Correct Option: 312243

Candidate Response:

Q52 | ID: 202922 | Section: LOGICAL REASONING

Question:

Read the information carefully and answer the question given below.

A word arrangement machine when given an input of words, rearranges them by following a particular rule in each step. The following is an illustration of input and steps rearrangement.

Input: 9 cat box 2 65 solve 47 when

Step 1: 65 9 cat box 2 solve 47 when

Step 2: 65 box 9 cat 2 solve 47 when

Step 3: 65 box 47 9 cat 2 solve when

Step 4: 65 box 47 cat 9 2 solve when

Step 5: 65 box 47 cat 9 solve 2 when

This is the final arrangement and Step 5 is the last step.

As per the rules followed in the given input, answer the question given below for the following input.

INPUT: denizen 41 denial 18 28 denitrify 5 63 denim denigrate

What is the difference between 80 and the number which is fourth from right end in step 5?

Options:

Option ID: 312246 67

Option ID: 312247 77

Option ID: 312248 65

Option ID: 312249 80

Option ID: 312250 62



Trusted for Success

Q53 | ID: 202923 | Section: LOGICAL REASONING

Question:

Study the following information carefully and answer the given question:
A word and number arrangement machine when given an input line of words and numbers, rearranges them following a particular rule in each step. The following is an illustration of input and rearrangement. (All the numbers are two digit numbers).

Input: monk 79 bill rock 34 73 hole 80 sand fog 22 jam 60 99

Step I: sand 99 monk 79 bill rock 34 73 hole 80 fog 22 jam 60

Step II: sand rock 99 80 monk 79 bill 34 73 hole fog 22 jam 60

Step III: sand rock monk 99 80 79 bill 34 73 hole fog 22 jam 60

Step IV: sand rock monk 99 80 79 jam 73 bill 34 hole fog 22 60

Step V: sand rock monk 99 80 79 jam hole 73 60 bill 34 fog 22

Step VI: sand rock monk 99 80 79 jam hole fog 73 60 34 bill 22

And Step VI is the last step of the above input, as the desired arrangement is obtained.

As per the followed in the above steps, find out in each of the following questions the appropriate step for the given input.

Input: 23 mat belt 50 car 36 73 hay 66 owl 40 sell fool 47

How many elements (words or numbers) are there between '50' and '36' in the sixth step?

Options:

Option ID: 312251 Three

Option ID: 312252 Four

Option ID: 312253 Two

Option ID: 312254 Five

Option ID: 312255 one

Correct Option: 312254

Candidate Response:

Q54 | ID: 202924 | Section: LOGICAL REASONING

Question:

Study the following information carefully and answer the given question:

A word and number arrangement machine when given an input line of words and numbers, rearranges them following a particular rule in each step. The following is an illustration of input and rearrangement. (All the numbers are two digit numbers).

Input: monk 79 bill rock 34 73 hole 80 sand fog 22 jam 60 99

Step I: sand 99 monk 79 bill rock 34 73 hole 80 fog 22 jam 60

Step II: sand rock 99 80 monk 79 bill 34 73 hole fog 22 jam 60

Step III: sand rock monk 99 80 79 bill 34 73 hole fog 22 jam 60

Step IV: sand rock monk 99 80 79 jam 73 bill 34 hole fog 22 60

Step V: sand rock monk 99 80 79 jam hole 73 60 bill 34 fog 22

Step VI: sand rock monk 99 80 79 jam fog 73 60 34 bill 22

And Step VI is the last step of the above input, as the desired arrangement is obtained.

As per the followed in the above steps, find out in each of the following questions the appropriate step for the given input.

Input: 23 mat belt 50 car 36 73 hay 66 owl 40 sell fool 47

In which step are '47 23 belt car' found in same order?

Options:

Option ID: 312256 2

Option ID: 312257 3

Option ID: 312258 4

Option ID: 312259 5

Option ID: 312260 6

Trusted for Success



Trusted for Success

Question:

Study the following information and answer the question given below:

An alphabetical machine, when given an input of words rearranges them following a particular rule in each step. The following is an illustration of input and step of rearrangement.

INPUT: COVER LAYER MINIMUM CONTROL AMAZE UNIQUE INITIAL ENTER FINAL
EXIT

Step I: COVER LAYER MINIMUM CONTROL AMAZE INITIAL ENTER FINAL

Step II: COVER LAYER MINIMUM CONTROL FINAL

Step III: CONTROL COVER FINAL LAYER MINIMUM

Step IV: COVER FINAL LAYER CONTROL MINIMUM

Step IV is the final step of the arrangement.

As per the followed in the above steps, find out in each of the following questions the appropriate step for the given input.

INPUT: FILES GRADE INSIDE AWARE ADVANCE PAIRS FOREIGN ALTER OVER
TOWARDS

Which word is given between the words FOREIGN and TOWARDS in step I?

Options:

Option ID: 312261 ALTER

Option ID: 312262 ADVANCE

Option ID: 312263 AWARE

Option ID: 312264 GRADE

Option ID: 312265 CONTROL

Correct Option: 312261

Candidate Response:

Q56 | ID: 202926 | Section: LOGICAL REASONING

Question:

Study the following arrangement carefully and answer the question given below

6 R 0 T 4 A 8 % B F 1 E # W @ 9 H I \$ M N * 3 2 V \$ 5 G P 7 Q

If all the symbols are eliminated from the above arrangement, than which of the following will be the 5th to the right of 10th element from the right end?

Options:

Option ID: 312266 5

Option ID: 312267 V

Option ID: 312268 4

Option ID: 312269 A

Option ID: 312270 G

Correct Option: 312266

Candidate Response:



Trusted for Success

Q57 | ID: 202927 | Section: LOGICAL REASONING

Question:

Study the following sequence carefully. Perform the swap as described below and answer the question.

Sequence:

P 3 Q % R 5 S \$ T 7 U & V 9 W # X 2 Y @ Z

Instruction:

All symbols immediately followed by consonants interchange positions with that consonant.

Question:

Which element is 6th from the left after performing the swaps?

Options:

Option ID: 312271 S

Option ID: 312272 \$

Option ID: 312273 U

Option ID: 312274 5

Option ID: 312275 @

Correct Option: 312274

Candidate Response:



Trusted for Success

Q58 | ID: 202928 | Section: LOGICAL REASONING

Question:

In the given sequence, certain pairs of elements are interchanged as shown. After performing all interchanges, find the required element.

Sequence:

A 7 B % C 3 D & E 9 F \$ G 2 H #

Swaps:

A ↔ 7, B ↔ %, C ↔ 3, D ↔ &, E ↔ 9, F ↔ \$, G ↔ 2, H ↔ #

Question:

Which element will be 12th from the left after all interchanges?

Options:

Option ID: 312276 E

Option ID: 312277 D

Option ID: 312278 \$

Option ID: 312279 F

Option ID: 312280 C

Correct Option: 312279

Candidate Response:



Trusted for Success

Q59 | ID: 202929 | Section: LOGICAL REASONING

Question:

Study the following arrangement carefully and answer the question given below:

W 1 R % 4 J E # 7 M 2 I 9 B H 3 A \$ 9 F Q 5 G 6 U S P

Which of the following is the eighth to the right of the eighteenth from the right end?

Options:

Option ID: 312281 A

Option ID: 312282 E

Option ID: 312283 \$

Option ID: 312284 #

Option ID: 312285 U



Trusted for Success

Correct Option: 312283

Candidate Response:

Q60 | ID: 202930 | Section: LOGICAL REASONING

Question:

Study the following arrangement carefully and answer the question that follows.

7 A M 4 E 9 U B 6 T A 3 C E 8 M U 5 B A 2 E T 9 C M U

If all the vowels and even numbers are dropped from the above arrangement, which of the following will be the 10th from the left end of the remaining arrangement?

Options:

Option ID: 312286 B

Option ID: 312287 C

Option ID: 312288 M

Option ID: 312289 T

Option ID: 312290 5

Correct Option: 312286

Candidate Response:



Trusted for Success

Question:

Arrange the given words in logical and meaningful sequence:

1. Hecto
2. Centi
3. Deca
4. Kilo
5. Deci

Options:

Option ID: 312291 1,3,4,5,2

Option ID: 312292 1,5,3,4,2

Option ID: 312293 2,5,3,1,4

Option ID: 312294 5,2,1,4,3

Option ID: 312295 1,4,5,3,2

Correct Option: 312293

Candidate Response:



Trusted for Success

Question:

If the following five words are arranged in alphabetical order, then which word will come in the middle ?

- (a) Electric
- (b) Elector
- (c) Electrode
- (d) Elect
- (e) Electron

Options:

Option ID: 312296 a

Option ID: 312297 b

Option ID: 312298 c

Option ID: 312299 d

Option ID: 312300 e

Correct Option: 312296

Candidate Response:



Trusted for Success

Q63 | ID: 202933 | Section: LOGICAL REASONING

Question:

Arrange the following in a logical order:

1. Millennium 2. Diamond Jubilee 3. Silver Jubilee 4. Centenary 5. Golden Jubilee

Options:

Option ID: 312301 2, 3, 5, 4, 1

Option ID: 312302 3, 2, 4, 1, 5

Option ID: 312303 3, 5, 2, 4, 1

Option ID: 312304 3, 1, 5, 2, 4

Option ID: 312305 2, 4, 1, 3, 5



Trusted for Success

Correct Option: 312303

Candidate Response:

Question:

Arrange the following in a logical order:

1. Never
2. Sometimes
3. Generally
4. Seldom
5. Always

Options:

Option ID: 312306 5, 2, 1, 3, 4

Option ID: 312307 5, 2, 4, 1, 3

Option ID: 312308 5, 3, 2, 1, 4

Option ID: 312309 5, 3, 2, 4, 1

Option ID: 312310 5, 2, 4, 3, 1

Correct Option: 312309

Candidate Response:



Trusted for Success

Question:

Arrange the following steps involved in policy formulation and implementation in the correct chronological order.

- A. Monitoring and evaluation**
- B. Identification of public problem**
- C. Policy approval by authority**
- D. Policy design and drafting**
- E. Policy impact assessment**
- F. Stakeholder consultation**
- G. Policy implementation**

Options:

Option ID: 312311 B → F → D → C → G → A → E

Option ID: 312312 B → D → F → C → G → A → E

Option ID: 312313 B → F → C → D → G → A → E

Option ID: 312314 B → D → C → F → G → A → E

Option ID: 312315 F → B → D → C → G → A → E

Correct Option: 312311

Candidate Response:

Q66 | ID: 202936 | Section: LOGICAL REASONING

Question:

Insert the missing number in the figure given below

25200	5
3600	5
?	10
120	30

Options:

Option ID: 312316 600

Option ID: 312317 400

Option ID: 312318 360

Option ID: 312319 500

Option ID: 312320 550

Correct Option: 312316

Candidate Response:



Trusted for Success

Question:

Insert the missing number in the figure given below

7	22	5
5	9	11
9	11	15
38	77	?

Options:

Option ID: 312321 200

Option ID: 312322 180

Option ID: 312323 190

Option ID: 312324 150

Option ID: 312325 160

Correct Option: 312325

Candidate Response:



Trusted for Success

Q68 | ID: 202938 | Section: LOGICAL REASONING

Question:

Insert the missing number in the following question?

4	5	3	2	0
7	3	4	4	21
6	4	4	5	22
9	6	5	5	?

Options:

Option ID: 312326 34

Option ID: 312327 42

Option ID: 312328 44

Option ID: 312329 45

Option ID: 312330 38

Correct Option: 312326

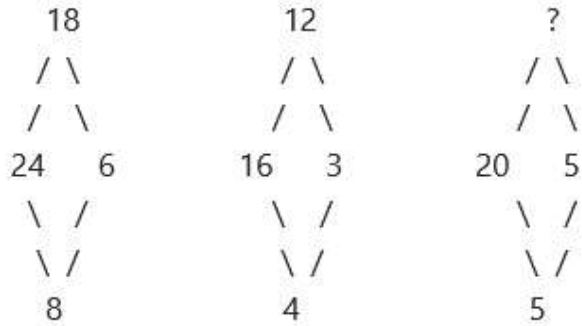
Candidate Response:



Trusted for Success

Question:

Insert the missing number in the following question.



Options:

Option ID: 312331 25

Option ID: 312332 35

Option ID: 312333 64

Option ID: 312334 20

Option ID: 312335 56

Correct Option: 312334

Candidate Response:



Trusted for Success

Question:

Insert the missing number in the following question

72	24	6
96	16	12
108	?	18

Options:

Option ID: 312336 18

Option ID: 312337 20

Option ID: 312338 16

Option ID: 312339 12

Option ID: 312340 22

Correct Option: 312339

Candidate Response:



Trusted for Success

Question:

In question below are given two statements followed by two conclusions numbered I and II. You have to take the given two statements to be true even if they seem to be at variance from commonly known facts. Read the conclusion and then decide which of the given conclusions logically follows from the two given statements, disregarding commonly known facts.

Give answer:

- (A) If only conclusion I follows
- (B) If only conclusion II follows
- (C) If either I or II follows
- (D) If neither I nor II follows and
- (E) If both I and II follow.

Statements: All young scientists are open-minded.

No open-minded men are superstitious.

Conclusions:

- 1. No scientist is superstitious.
- 2. No young people are superstitious.



Options:

Option ID: 312341 A

Option ID: 312342 B

Option ID: 312343 C

Option ID: 312344 D

Option ID: 312345 E

Correct Option: 312344	Candidate Response:
-------------------------------	----------------------------

Question:

The question below consists of a question and three statements numbered I, II and III given below it. You have to decide whether the data provided in the statements are sufficient to answer the question. Read all the statements and give answer:

Question : In a family there are 5 members, Nidhi, Vidhi, Nitya, Ajay and Anil. Find the present age of Anil.

Statement :

I. The average age of five family members is 36 years.

II. The total age of Nidhi, Vidhi and Anil is 75 years.

III. The present age of Anil is 12 years more than the age of Ajay.

A. The data in statements I alone is sufficient to answer the question, while the data in statement II and III is not sufficient to answer the question.

B. The data in statements II and III is sufficient to answer the question, while the data in statement I is not sufficient to answer the question.

C. The data in statements I and II or in statement II and III is sufficient to answer the question.

D. The data in all the statements I, II and III is not sufficient to answer the question.

E. The data in all the statements I, II and III together is necessary to answer the question.

Options:

Option ID: 312351 A

Option ID: 312352 B

Option ID: 312353 C

Option ID: 312354 D

Option ID: 312355 E

Correct Option: 312354

Candidate Response:

Q74 | ID: 202944 | Section: LOGICAL REASONING

Question:

If \times stands for $-$, $+$ means \times , \div means $+$ and $-$ means \div , then what is the value of the given expression ?

$$175 - 25 \div 5 + 20 \times 3 + 10 = ?$$

Options:

Option ID: 312356 80

Option ID: 312357 85

Option ID: 312358 92

Option ID: 312359 77

Option ID: 312360 65

Correct Option: 312359

Candidate Response:



Trusted for Success

Q75 | ID: 202945 | Section: LOGICAL REASONING

Question:


In a certain code language, the symbols \times , $-$, \div , and $+$ do not represent their usual meanings.

Instead:

- \times is used for division (\div)
- $-$ is used for multiplication (\times)
- \div is used for addition ($+$)
- $+$ is used for subtraction ($-$)

Using this information, find the value of the expression:

$$(5-17\div 5)\times 9+13$$



Options:

Option ID: 312361 -3

Option ID: 312362 3

Option ID: 312363 2

Option ID: 312364 -4

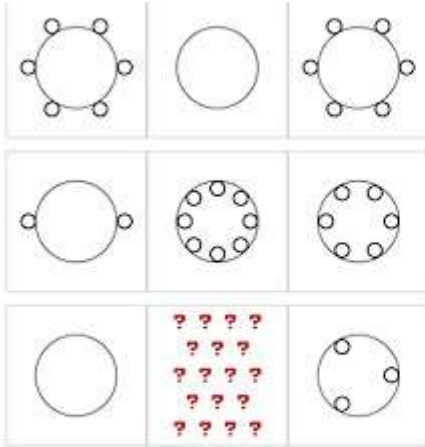
Option ID: 312365 5

Correct Option: 312361

Candidate Response:

Question:

DIRECTIONS for the question: Study the figure given below and answer the following question.



Which of the following figure shall come in place of ' ? ' :



Options:

Option ID: 312366 1

Option ID: 312367 2

Option ID: 312368 3

Option ID: 312369 4

Option ID: 312370 5

Correct Option: 312368

Candidate Response:

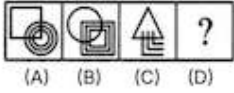


Trusted for Success

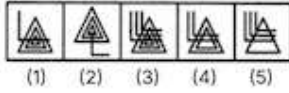
Question:

Select a suitable figure from the Answer Figures that would replace the question mark (?) from the problem figure ?

Problem Figures:



Answer Figures:



Options:

Option ID: 312371 (1)

Option ID: 312372 (2)

Option ID: 312373 (3)

Option ID: 312374 (4)

Option ID: 312375 (5)



Trusted for Success

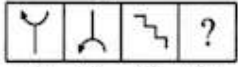
Correct Option: 312371

Candidate Response:

Question:

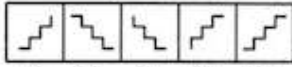
Select a suitable figure from the Answer Figures that would replace the question mark (?) as given in (D) :

Problem Figures:



(A) (B) (C) (D)

Answer Figures:



(1) (2) (3) (4) (5)

Options:

Option ID: 312376 (1)

Option ID: 312377 (2)

Option ID: 312378 (3)

Option ID: 312379 (4)

Option ID: 312380 (5)



Trusted for Success

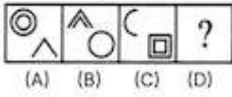
Correct Option: 312376

Candidate Response:

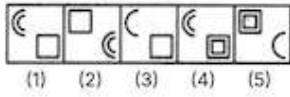
Question:

Select a suitable figure from the Answer Figures that would replace the question mark (?) as given in (D) :

Problem Figures:



Answer Figures:



Options:

Option ID: 312381 (1)

Option ID: 312382 (2)

Option ID: 312383 (3)

Option ID: 312384 (4)

Option ID: 312385 (5)



Trusted for Success

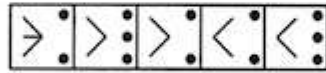
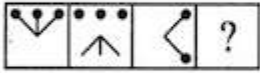
Correct Option: 312382

Candidate Response:

Q80 | ID: 202950 | Section: ABSTRACT REASONING

Question:

Select a suitable figure from the Answer Figures that would replace the question mark (?) as given in (D) :



(A) (B) (C) (D)

1 2 3 4 5

Options:

Option ID: 312386 1

Option ID: 312387 2

Option ID: 312388 3

Option ID: 312389 4

Option ID: 312390 5



Trusted for Success

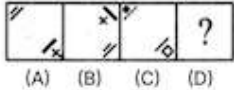
Correct Option: 312388

Candidate Response:

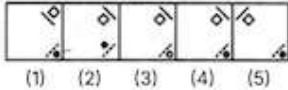
Question:

Select a suitable figure from the Answer Figures that would replace the question mark (?) as given in (D) :

Problem Figures:



Answer Figures:



Options:

Option ID: 312391 (1)

Option ID: 312392 (2)

Option ID: 312393 (3)

Option ID: 312394 (4)

Option ID: 312395 (5)



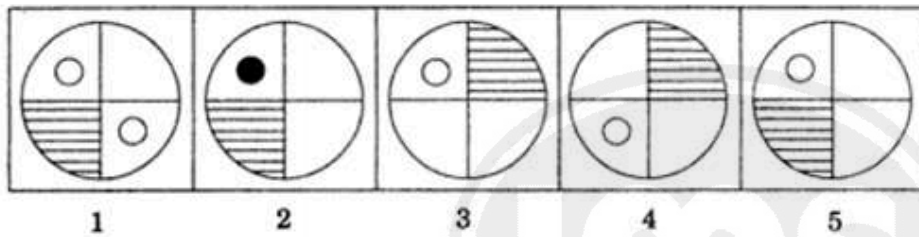
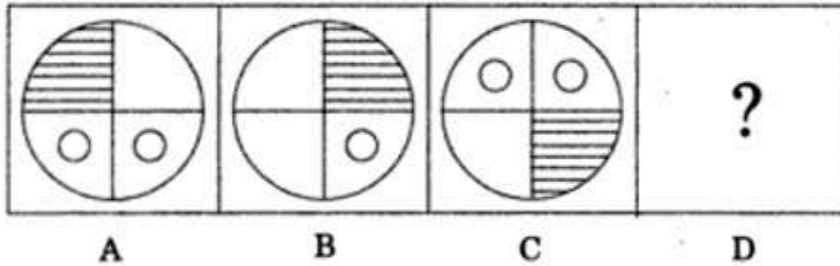
Trusted for Success

Correct Option: 312392

Candidate Response:

Question:

DIRECTIONS for the question: Study the figure given below and answer the following question.



Which option shall best complete the series shown by '?' in D :

Options:

Option ID: 312396 1

Option ID: 312397 2

Option ID: 312398 3

Option ID: 312399 4

Option ID: 312400 5

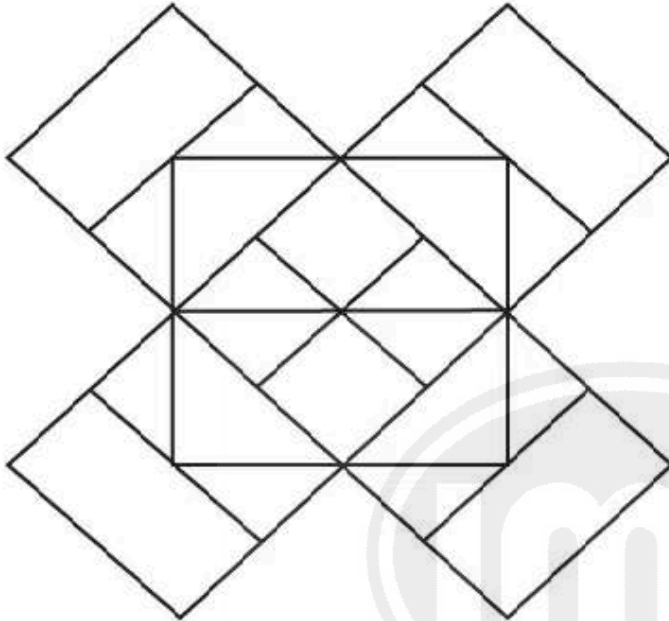
Correct Option: 312400

Candidate Response:

Q83 | ID: 202953 | Section: ABSTRACT REASONING

Question:

How many rectangles are there in the figure below?



Options:

Option ID: 312401 37

Option ID: 312402 44

Option ID: 312403 48

Option ID: 312404 41

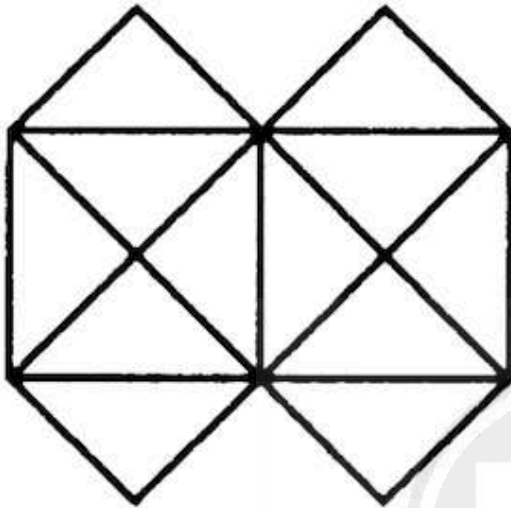
Option ID: 312405 34

Correct Option: 312405

Candidate Response:

Question:

How many minimum straight lines are needed to construct the below given figure ?



Options:

Option ID: 312406 17

Option ID: 312407 13

Option ID: 312408 11

Option ID: 312409 15

Option ID: 312410 10

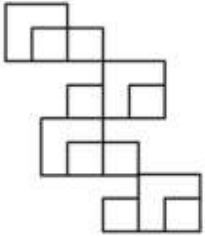
Correct Option: 312407

Candidate Response:

Q85 | ID: 202955 | Section: ABSTRACT REASONING

Question:

Find the number of squares in the given figure ?



Options:

Option ID: 312411 12

Option ID: 312412 13

Option ID: 312413 14

Option ID: 312414 18

Option ID: 312415 10

Correct Option: 312411

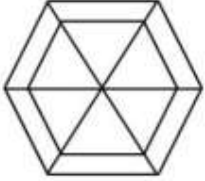
Candidate Response:



Trusted for Success

Question:

Find the number of triangles in the given figure ?



Options:

Option ID: 312416 11

Option ID: 312417 12

Option ID: 312418 10

Option ID: 312419 9

Option ID: 312420 13



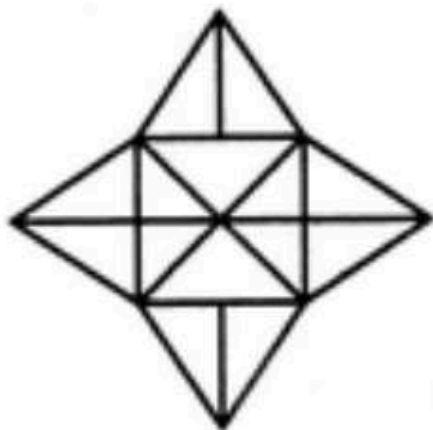
Trusted for Success

Correct Option: 312417

Candidate Response:

Question:

Find the number of triangles in the given figure.



Options:

Option ID: 312421 19

Option ID: 312422 25

Option ID: 312423 32

Option ID: 312424 28

Option ID: 312425 35

Correct Option: 312424

Candidate Response:

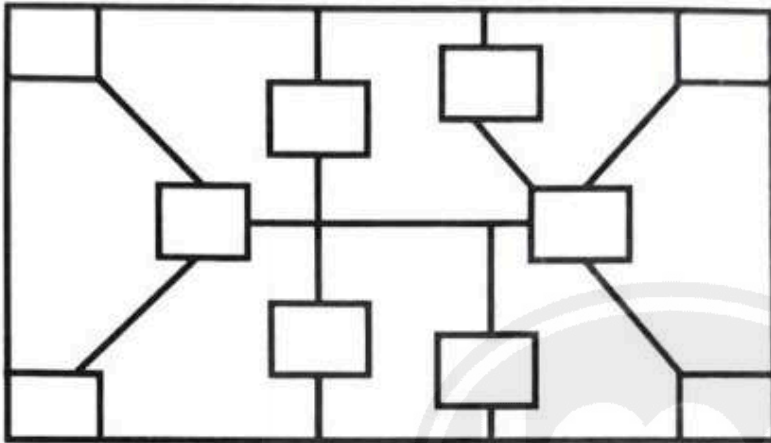


Trusted for Success

Question:

DIRECTIONS for the question: Study the figure given below and answer the following question.

How many rectangles are there in the following figure?



Options:

Option ID: 312426 9

Option ID: 312427 11

Option ID: 312428 10

Option ID: 312429 12

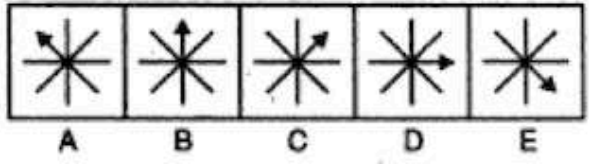
Option ID: 312430 13

Correct Option: 312427

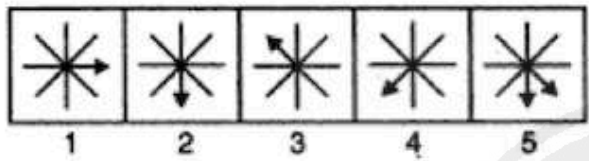
Candidate Response:

Question:

Given below are five images named A, B, C, D and E that follow a certain pattern.



Choose from the other series of five images named, 1, 2, 3, 4 and 5, the image that correctly continues the pattern that is found in the first set of five images :



Options:

Option ID: 312431 1

Option ID: 312432 2

Option ID: 312433 3

Option ID: 312434 4

Option ID: 312435 5


Correct Option: 312432

Candidate Response:




Question:

Which of the given option represents the water image of the problem image correctly ?




Options:


Option ID: 312436




Option ID: 312437



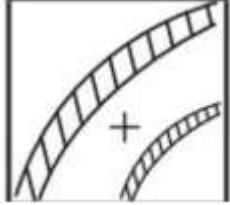
Option ID: 312438



Option ID: 312439



Option ID: 312440



Correct Option: 312437

Candidate Response:



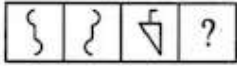
Trusted for Success

Q91 | ID: 202961 | Section: ABSTRACT REASONING

Question:

Select the option that shall correctly come in place of "?" as given in (D) of the problem figure :

Problem Figures:



(A) (B) (C) (D)

Answer Figures:



(1) (2) (3) (4) (5)

Options:

Option ID: 312441 (1)

Option ID: 312442 (2)

Option ID: 312443 (3)

Option ID: 312444 (4)

Option ID: 312445 (5)



Trusted for Success

Correct Option: 312442

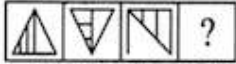
Candidate Response:

Question:

Identify the correct option from the Answer Figures that shall come in place of "?"

:

Problem Figures:



(A) (B) (C) (D)

Answer Figures:



(1) (2) (3) (4) (5)

Options:

Option ID: 312446 (1)

Option ID: 312447 (2)

Option ID: 312448 (3)

Option ID: 312449 (4)

Option ID: 312450 (5)



Trusted for Success

Correct Option: 312446

Candidate Response:

Question:

Choose the correct water image of the image given in the question :



Options:

Option ID: 312451



Option ID: 312452



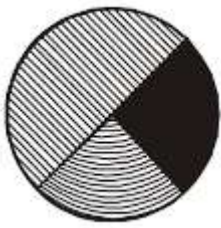
Option ID: 312453



Option ID: 312454



Option ID: 312455



Correct Option: 312454

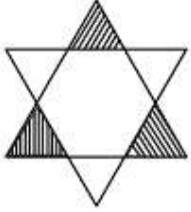
Candidate Response:



Trusted for Success

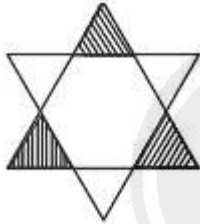
Question:

Identify the correct water image of the question figure :

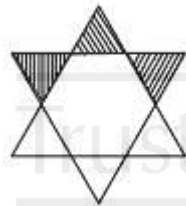


Options:

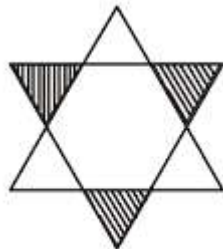
Option ID: 312456



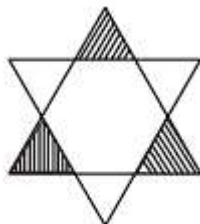
Option ID: 312457



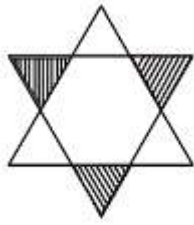
Option ID: 312458



Option ID: 312459



Option ID: 312460



Correct Option: 312460

Candidate Response:

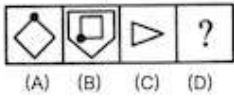


Trusted for Success

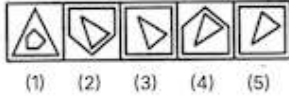
Question:

Choose the correct option from the Answer Figure that shall come in place of "?" in the Problem Figure :

Problem Figures:



Answer Figures:



Options:

Option ID: 312461 (1)

Option ID: 312462 (2)

Option ID: 312463 (3)

Option ID: 312464 (4)

Option ID: 312465 (5)



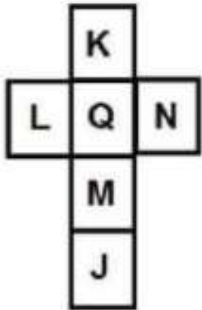
Trusted for Success

Correct Option: 312463

Candidate Response:

Question:

A Cube is formed by folding the Sheet of paper shown here. Find the alphabet that shall lie exactly opposite to the face on the cube that shows N :



Options:

Option ID: 312466 K

Option ID: 312467 J

Option ID: 312468 L

Option ID: 312469 M

Option ID: 312470 Q

Correct Option: 312468

Candidate Response:



Trusted for Success

Question:

Choose the image that completes the pattern (From left to right):



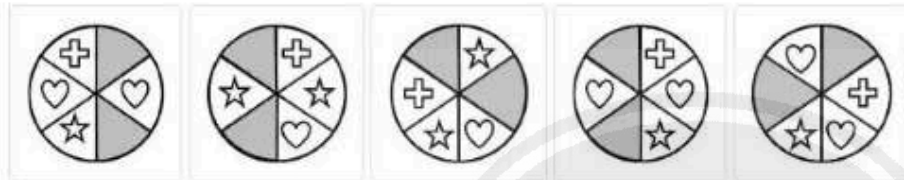
A

B

C

D

E



Options:

Option ID: 312471 A

Option ID: 312472 B

Option ID: 312473 C

Option ID: 312474 D

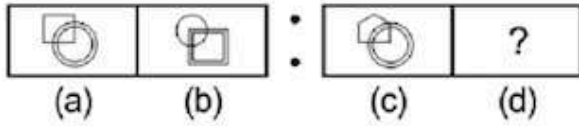
Option ID: 312475 E

Correct Option: 312474

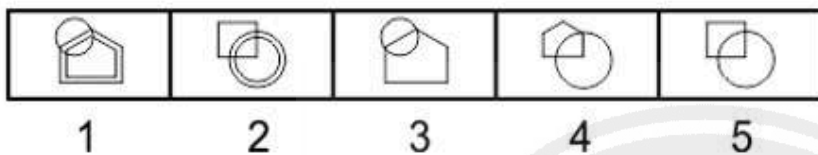
Candidate Response:

Question:

Find the figure from the Answer Figure that will replace the question mark (?) from the Problem Figure :



Problem Figure



Answer Figure

Options:

Option ID: 312476 1

Option ID: 312477 2

Option ID: 312478 3

Option ID: 312479 4

Option ID: 312480 5

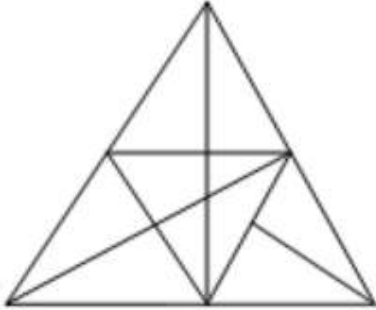
Correct Option: 312476

Candidate Response:



Question:

Count the number of triangles in the given image ?



Options:

Option ID: 312481 29

Option ID: 312482 31

Option ID: 312483 28

Option ID: 312484 30

Option ID: 312485 26

Correct Option: 312481

Candidate Response:

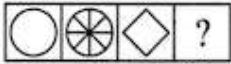


Trusted for Success

Question:

Select a suitable figure from the Answer Figures that would replace the question mark (?) as given in (D) :

Problem Figures:



(A) (B) (C) (D)

Answer Figures:



(1) (2) (3) (4) (5)

Options:

Option ID: 312486 (1)

Option ID: 312487 (2)

Option ID: 312488 (3)

Option ID: 312489 (4)

Option ID: 312490 (5)



Trusted for Success

Correct Option: 312486

Candidate Response:

Q101 | ID: 202971 | Section: QUANTITATIVE APTITUDE

Question:

DIRECTION for the question: Solve the following question and mark the best possible option.

$$587 \times 999 = ?$$

Options:

Option ID: 312491 586413

Option ID: 312492 587523

Option ID: 312493 614823

Option ID: 312494 615173

Option ID: 312495 615976



Trusted for Success

Correct Option: 312491

Candidate Response:

Q102 | ID: 202972 | Section: QUANTITATIVE APTITUDE

Question:

How many 3-digit numbers are there in between 100 and 300, having first and the last digit as 2?

Options:

Option ID: 312496 9

Option ID: 312497 10

Option ID: 312498 11

Option ID: 312499 12

Option ID: 312500 13



Trusted for Success

Correct Option: 312497

Candidate Response:

Q103 | ID: 202973 | Section: QUANTITATIVE APTITUDE

Question:

DIRECTION for the question: Solve the following question and mark the best possible option.

The H.C.F. of 2923 and 3239 is?

Options:

Option ID: 312501 37

Option ID: 312502 47

Option ID: 312503 73

Option ID: 312504 79

Option ID: 312505 22



Trusted for Success

Correct Option: 312504

Candidate Response:

Q104 | ID: 202974 | Section: QUANTITATIVE APTITUDE

Question:

DIRECTION for the question: Solve the following question and mark the best possible option.

$$400 \div 0.1 \times 0.2 = ?$$

Options:

Option ID: 312506 0.8

Option ID: 312507 8

Option ID: 312508 80

Option ID: 312509 8000

Option ID: 312510 800



Trusted for Success

Correct Option: 312510

Candidate Response:

Q105 | ID: 202975 | Section: QUANTITATIVE APTITUDE

Question:

DIRECTION for the question: Solve the following question and mark the best possible option.

Given $168 \times 32 = 5376$, then $5.376 \div 16.8$ is equal to?

Options:

Option ID: 312511 0.032

Option ID: 312512 0.32

Option ID: 312513 3.2

Option ID: 312514 320

Option ID: 312515 32



Trusted for Success

Correct Option: 312512

Candidate Response:

Q106 | ID: 202976 | Section: QUANTITATIVE APTITUDE

Question:

DIRECTION for the question: Solve the following question and mark the best possible option.

When a sum of money was distributed to 12 persons instead of 16 persons, each person got Rs. 400 more. What was the sum?

Options:

Option ID: 312516 Rs. 14400

Option ID: 312517 Rs. 16000

Option ID: 312518 Rs. 19200

Option ID: 312519 Rs. 14151

Option ID: 312520 Rs. 16987



Trusted for Success

Correct Option: 312518

Candidate Response:

Question:

DIRECTION for the question: Solve the following question and mark the best possible option.

On a 26 question test, five points were deducted for each wrong answer and eight points were credited for each correct answer. If all the questions were answered, how many were correct if the score was zero?

Options:

Option ID: 312521 6

Option ID: 312522 9

Option ID: 312523 10

Option ID: 312524 13

Option ID: 312525 17



Trusted for Success

Correct Option: 312523

Candidate Response:

Q108 | ID: 202978 | Section: QUANTITATIVE APTITUDE

Question:

DIRECTION for the question: Solve the following question and mark the best possible option.

A library has an average of 510 visitors on Sundays and 240 on other days. The average number of visitors per day in a month of 30 days beginning with a Sunday is

Options:

Option ID: 312526 250

Option ID: 312527 276

Option ID: 312528 280

Option ID: 312529 285

Option ID: 312530 240



Trusted for Success

Correct Option: 312529

Candidate Response:

Q109 | ID: 202979 | Section: QUANTITATIVE APTITUDE

Question:

DIRECTION for the question: Solve the following question and mark the best possible option.

A motorist travels to a place 150 km away at an average speed of 50 km/hr and returns at 30 km/hr. His average speed for the whole journey in km/hr is?

Options:

Option ID: 312531 35

Option ID: 312532 37

Option ID: 312533 37.5

Option ID: 312534 40.5

Option ID: 312535 40



Trusted for Success

Correct Option: 312533

Candidate Response:

Q110 | ID: 202980 | Section: QUANTITATIVE APTITUDE

Question:

DIRECTION for the question: Solve the following question and mark the best possible option.

The population of a town increased from 1, 75,000 to 2, 62,500 in a decade. The average % increase in the population per year is?

Options:

Option ID: 312536 4.37%

Option ID: 312537 5%

Option ID: 312538 6%

Option ID: 312539 8.75%

Option ID: 312540 8%



Trusted for Success

Correct Option: 312537

Candidate Response:

Q111 | ID: 202981 | Section: QUANTITATIVE APTITUDE

Question:

DIRECTION for the question: Solve the following question and mark the best possible option.

If $p\%$ of p is 36, then p is equal to

Options:

Option ID: 312541 15

Option ID: 312542 60

Option ID: 312543 600

Option ID: 312544 3600

Option ID: 312545 36



Trusted for Success

Correct Option: 312542

Candidate Response:

Q112 | ID: 202982 | Section: QUANTITATIVE APTITUDE

Question:

DIRECTION for the question: Solve the following question and mark the best possible option.

The profit earned by selling an article for Rs. 900 is double the loss incurred when the same article is sold for Rs. 450. At what price should the article be sold to make a 25% profit?

Options:

Option ID: 312546 Rs. 600

Option ID: 312547 Rs. 750

Option ID: 312548 Rs. 800

Option ID: 312549 Rs. 900

Option ID: 312550 Rs. 450



Trusted for Success

Correct Option: 312547

Candidate Response:

Q113 | ID: 202983 | Section: QUANTITATIVE APTITUDE

Question:

DIRECTION for the question: Solve the following question and mark the best possible option.

A fan is listed at Rs. 1500 and a discount of 20% is offered on the list price. What additional discount must be offered to the customer to bring the net price to Rs. 1104?

Options:

Option ID: 312551 8%

Option ID: 312552 10%

Option ID: 312553 12%

Option ID: 312554 15%

Option ID: 312555 20%



Trusted for Success

Correct Option: 312551

Candidate Response:

Q114 | ID: 202984 | Section: QUANTITATIVE APTITUDE

Question:

DIRECTION for the question: Solve the following question and mark the best possible option.

The expenses of A and B are in the ratio 2 : 3. A sum of Rs. 2800 is equally divided between them. If A saves Rs. 600, then B saves?

Options:

Option ID: 312556 Rs.200

Option ID: 312557 Rs.300

Option ID: 312558 Rs.400

Option ID: 312559 Rs.500

Option ID: 312560 Rs.600



Trusted for Success

Correct Option: 312556

Candidate Response:

Q115 | ID: 202985 | Section: QUANTITATIVE APTITUDE

Question:

DIRECTION for the question: Solve the following question and mark the best possible option.

There are 420 coins consisting of one-rupee coins, 50-paise coins and 25-paise coins. If the ratio of their values is 2 : 3 : 5, then the number of one-rupee coins is

Options:

Option ID: 312561 20

Option ID: 312562 30

Option ID: 312563 90

Option ID: 312564 300

Option ID: 312565 50



Trusted for Success

Correct Option: 312562

Candidate Response:

Q116 | ID: 202986 | Section: QUANTITATIVE APTITUDE

Question:

DIRECTION for the question: Solve the following question and mark the best possible option.

Manick received Rs. 6000 as his share out of the total profit of Rs. 9000 which he and Raunaq earned at the end of one year. If Manick invested Rs. 20000 for 6 months, whereas Raunaq invested his amount for the whole year, what was the amount invested by Raunaq?

Options:

Option ID: 312566 Rs. 4000

Option ID: 312567 Rs. 5000

Option ID: 312568 Rs. 6000

Option ID: 312569 Rs. 10,000

Option ID: 312570 Rs. 9000

Correct Option: 312567

Candidate Response:



Trusted for Success

Q117 | ID: 202987 | Section: QUANTITATIVE APTITUDE

Question:

DIRECTION for the question: Solve the following question and mark the best possible option.

Arun, Kamal and Vinay invested ₹8000, ₹4000 and ₹8000 respectively in a business. Arun left after six months. If after eight months, there was a gain of ₹4005, then what will be the share of Kamal ?

Options:

Option ID: 312571 ₹890

Option ID: 312572 ₹1335

Option ID: 312573 ₹1602

Option ID: 312574 ₹1780

Option ID: 312575 ₹666



Trusted for Success

Correct Option: 312571

Candidate Response:

Q118 | ID: 202988 | Section: QUANTITATIVE APTITUDE

Question:

DIRECTION for the question: Solve the following question and mark the best possible option.

The cost of 16 packets of salt, each weighing 900 grams, is Rs. 28. What will be the cost of 27 packets if each packet weighs 1 kg?

Options:

Option ID: 312576 Rs. 52.50

Option ID: 312577 Rs. 56

Option ID: 312578 Rs. 58.50

Option ID: 312579 Rs. 64.75

Option ID: 312580 Rs. 28.50



Trusted for Success

Correct Option: 312576

Candidate Response:

Q119 | ID: 202989 | Section: QUANTITATIVE APTITUDE

Question:

DIRECTION for the question: Solve the following question and mark the best possible option.

In a dairy farm, 40 cows eat 40 bags of husk in 40 days. In how many days will one cow eat one bag of husk?

Options:

Option ID: 312581 10

Option ID: 312582 20

Option ID: 312583 40

Option ID: 312584 35

Option ID: 312585 45



Trusted for Success

Correct Option: 312583

Candidate Response:

Q120 | ID: 202990 | Section: QUANTITATIVE APTITUDE

Question:

DIRECTION for the question: Solve the following question and mark the best possible option.

Two pipes A and B can fill a tank in 15 minutes and 20 minutes respectively. Both the pipes are opened together but after 4 minutes, pipe A is turned off. What is the total time required to fill the tank?

Options:

Option ID: 312586 10 min 20 sec

Option ID: 312587 11 min 45 sec

Option ID: 312588 12 min 30 sec

Option ID: 312589 14 min 40 sec

Option ID: 312590 15 min 20 sec

Correct Option: 312589

Candidate Response:



Trusted for Success

Q121 | ID: 202991 | Section: QUANTITATIVE APTITUDE

Question:

DIRECTION for the question: Solve the following question and mark the best possible option.

Four pipes can fill a reservoir in 15, 20, 30 and 60 hours respectively. The first pipe was opened at 8 am, the second at 9 am, the third at 10 am and the fourth at 11 am. When will the reservoir be full?

Options:

Option ID: 312591 1:00 pm

Option ID: 312592 2:00 pm

Option ID: 312593 2:30 pm

Option ID: 312594 3:00 pm

Option ID: 312595 4:00 pm



Trusted for Success

Correct Option: 312594

Candidate Response:

Question:

DIRECTION for the question: Solve the following question and mark the best possible option.

A and B together can do a piece of work in 30 days. A having worked for 16 days, B finishes the remaining work alone in 44 days. In how many days shall B finish the whole work alone?

Options:

Option ID: 312596 30 days

Option ID: 312597 40 days

Option ID: 312598 60 days

Option ID: 312599 70 days

Option ID: 312600 80 days



Trusted for Success

Correct Option: 312598

Candidate Response:

Q123 | ID: 202993 | Section: QUANTITATIVE APTITUDE

Question:

DIRECTION for the question: Solve the following question and mark the best possible option.

Kim can do the work in 3 days, while David can do the same work in 2 days. Both of them finish the work together and get Rs. 150. What is the share of Kim in the amount?

Options:

Option ID: 312601 Rs. 30

Option ID: 312602 Rs. 60

Option ID: 312603 Rs. 70

Option ID: 312604 Rs. 75

Option ID: 312605 Rs. 90



Trusted for Success

Correct Option: 312602

Candidate Response:

Q124 | ID: 202994 | Section: QUANTITATIVE APTITUDE

Question:

DIRECTION for the question: Solve the following question and mark the best possible option.

If a person walked at 14 km/hr. instead of 10 km/hr., he would have walked 20 km more. The actual distance traveled by him is?

Options:

Option ID: 312606 50 km

Option ID: 312607 56 km

Option ID: 312608 70 km

Option ID: 312609 80 km

Option ID: 312610 30 km



Trusted for Success

Correct Option: 312606

Candidate Response:

Q125 | ID: 202995 | Section: QUANTITATIVE APTITUDE

Question:

DIRECTION for the question: Solve the following question and mark the best possible option.

A train X starts from Meerut at 4 pm and reaches Ghaziabad at 5 pm. While another train Y starts from Ghaziabad at 4pm and reaches Meerut at 5:30pm. The two trains will cross each other at?

Options:

Option ID: 312611 4.36 pm

Option ID: 312612 4.42 pm

Option ID: 312613 4.48 pm

Option ID: 312614 4.50 pm

Option ID: 312615 4.55 pm



Trusted for Success

Correct Option: 312611

Candidate Response:

Q126 | ID: 202996 | Section: QUANTITATIVE APTITUDE

Question:

DIRECTION for the question: Solve the following question and mark the best possible option.

Two trains, one from Howrah to Patna and the other from Patna to Howrah, start simultaneously. After they meet, the trains reach their destinations after 9 hours and 16 hours respectively. The ratio of their speed is?

Options:

Option ID: 312616 2 : 3

Option ID: 312617 4 : 3

Option ID: 312618 6 : 7

Option ID: 312619 9 : 16

Option ID: 312620 5 : 7



Trusted for Success

Correct Option: 312617

Candidate Response:

Question:

DIRECTION for the question: Solve the following question and mark the best possible option.

In what ratio must water be mixed with milk to gain $16\frac{2}{3}\%$ on selling the mixture at cost price?

Options:

Option ID: 312621 1 : 6

Option ID: 312622 6 : 1

Option ID: 312623 2 : 3

Option ID: 312624 4 : 3

Option ID: 312625 5 : 6



Trusted for Success

Correct Option: 312621

Candidate Response:

Question:

DIRECTION for the question: Solve the following question and mark the best possible option.

A vessel is filled with liquid, 3 parts of which are water and 5 parts of syrup. How much of the mixture must be drawn off and replaced with water so that the mixture may be half water and half syrup?

Options:

Option ID: 312626 $\frac{1}{3}$

Option ID: 312627 $\frac{1}{4}$

Option ID: 312628 $\frac{1}{5}$

Option ID: 312629 $\frac{1}{7}$

Option ID: 312630 $\frac{3}{5}$



Trusted for Success

Correct Option: 312628

Candidate Response:

Q129 | ID: 202999 | Section: QUANTITATIVE APTITUDE

Question:

DIRECTION for the question: Solve the following question and mark the best possible option.

The interest on a certain deposit at 4.5% p.a. is Rs. 202.50 in one year. How much will the additional interest in one year be on the same deposit, at 5% p.a.?

Options:

Option ID: 312631 Rs. 20.25

Option ID: 312632 Rs. 22.50

Option ID: 312633 Rs. 25

Option ID: 312634 Rs. 42.75

Option ID: 312635 Rs. 42.25



Trusted for Success

Correct Option: 312632

Candidate Response:

Q130 | ID: 203000 | Section: QUANTITATIVE APTITUDE

Question:

DIRECTION for the question: Solve the following question and mark the best possible option.

A sum of money at simple interest amounts to Rs. 815 in 3 years and Rs. 854 in 4 years. The sum is?

Options:

Option ID: 312636 Rs. 650

Option ID: 312637 Rs. 690

Option ID: 312638 Rs. 698

Option ID: 312639 Rs. 700

Option ID: 312640 Rs. 750



Trusted for Success

Correct Option: 312638

Candidate Response:

Q131 | ID: 203001 | Section: QUANTITATIVE APTITUDE

Question:

DIRECTION for the question: Solve the following question and mark the best possible option.

There is a 60% increase in the amount in 6 years at simple interest. What will be the compound interest of Rs. 12000 after 3 years at the same rate?

Options:

Option ID: 312641 Rs. 2160

Option ID: 312642 Rs. 3120

Option ID: 312643 Rs. 3972

Option ID: 312644 Rs. 6240

Option ID: 312645 Rs. 1200



Trusted for Success

Correct Option: 312643

Candidate Response:

Q132 | ID: 203002 | Section: QUANTITATIVE APTITUDE

Question:

DIRECTION for the question: Solve the following question and mark the best possible option.

A rectangular parking space is marked out by painting three of its sides. If the length of the unpainted side is 9 feet, and the sum of the lengths of the painted sides is 37 feet, then what is the area of the parking space in square feet?

Options:

Option ID: 312646 46

Option ID: 312647 81

Option ID: 312648 126

Option ID: 312649 252

Option ID: 312650 37



Trusted for Success

Correct Option: 312648

Candidate Response:

Q133 | ID: 203003 | Section: QUANTITATIVE APTITUDE

Question:

DIRECTION for the question: Solve the following question and mark the best possible option.

A rectangular field is to be fenced on three sides, leaving a side of 20 feet uncovered. If the area of the field is 680 sq. feet, how many feet of fencing will be required?

Options:

Option ID: 312651 34

Option ID: 312652 40

Option ID: 312653 68

Option ID: 312654 88

Option ID: 312655 38



Trusted for Success

Correct Option: 312654

Candidate Response:

Q134 | ID: 203004 | Section: QUANTITATIVE APTITUDE

Question:

DIRECTION for the question: Solve the following question and mark the best possible option.

A rectangular carpet has an area of 120 sq. meters and a perimeter of 46 meters. The length of its diagonal is?

Options:

Option ID: 312656 15 meters

Option ID: 312657 16 meters

Option ID: 312658 17 meters

Option ID: 312659 19 meters

Option ID: 312660 20 meters



Trusted for Success

Correct Option: 312658

Candidate Response:

Q135 | ID: 203005 | Section: QUANTITATIVE APTITUDE

Question:

DIRECTION for the question: Solve the following question and mark the best possible option.

In a 100 m race, A covers the whole distance in 36 seconds and B in 45 seconds. In this race, A beats B by

Options:

Option ID: 312661 20 m

Option ID: 312662 25 m

Option ID: 312663 22.5 m

Option ID: 312664 9 m

Option ID: 312665 10 m



Trusted for Success

Correct Option: 312661

Candidate Response:

Q136 | ID: 203006 | Section: QUANTITATIVE APTITUDE

Question:

DIRECTION for the question: Solve the following question and mark the best possible option.

In a 200 m race, A beats B by 35 m or 7 seconds. A's time over the course is

Options:

Option ID: 312666 40 sec

Option ID: 312667 47 sec

Option ID: 312668 33 sec

Option ID: 312669 35 sec

Option ID: 312670 20 sec



Trusted for Success

Correct Option: 312668

Candidate Response:

Question:

DIRECTION for the question: Solve the following question and mark the best possible option.

In how many different ways can the letters of the word OPTICAL can be arranged in such a way that the vowels always come together?

Options:

Option ID: 312671 120

Option ID: 312672 720

Option ID: 312673 2160

Option ID: 312674 4320

Option ID: 312675 6



Trusted for Success

Correct Option: 312672

Candidate Response:

Q138 | ID: 203008 | Section: QUANTITATIVE APTITUDE

Question:

DIRECTION for the question: Solve the following question and mark the best possible option.

In a class, there are 15 boys and 10 girls. Three students are selected at random. The probability that the selected students are 2 boys and 1 girl is:

Options:

Option ID: 312676 $\frac{21}{46}$

Option ID: 312677 $\frac{25}{117}$

Option ID: 312678 $\frac{1}{50}$

Option ID: 312679 $\frac{3}{25}$

Option ID: 312680 $\frac{21}{31}$



Trusted for Success

Correct Option: 312676

Candidate Response:

Q139 | ID: 203009 | Section: QUANTITATIVE APTITUDE

Question:

DIRECTION for the question: Solve the following question and mark the best possible option.

Two dice are tossed. The probability that the total score is a prime number is

Options:

Option ID: 312681 $\frac{1}{6}$

Option ID: 312682 $\frac{1}{2}$

Option ID: 312683 $\frac{5}{12}$

Option ID: 312684 $\frac{7}{9}$

Option ID: 312685 $\frac{2}{3}$



Trusted for Success

Correct Option: 312683

Candidate Response:

Q140 | ID: 203010 | Section: QUANTITATIVE APTITUDE

Question:

DIRECTION for the question: Find the next number in the sequence

7, 26, 63, 124, 215, 342, (---)

Options:

Option ID: 312686 481

Option ID: 312687 400

Option ID: 312688 511

Option ID: 312689 391

Option ID: 312690 421



Trusted for Success

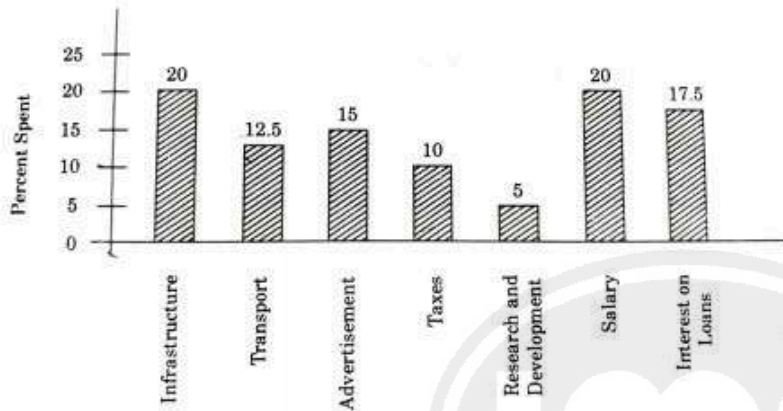
Correct Option: 312688

Candidate Response:

Question:

DIRECTIONS for Questions: The bar-graph given below shows the percentage distribution of total expenditures of a company under various expense heads during 2023. Study the graph and answer the questions that follow:

Percentage Distribution of Total Expenditures of a Company



Options:

Option ID: 312691 5%

Option ID: 312692 10%

Option ID: 312693 20%

Option ID: 312694 30%

Option ID: 312695 40%

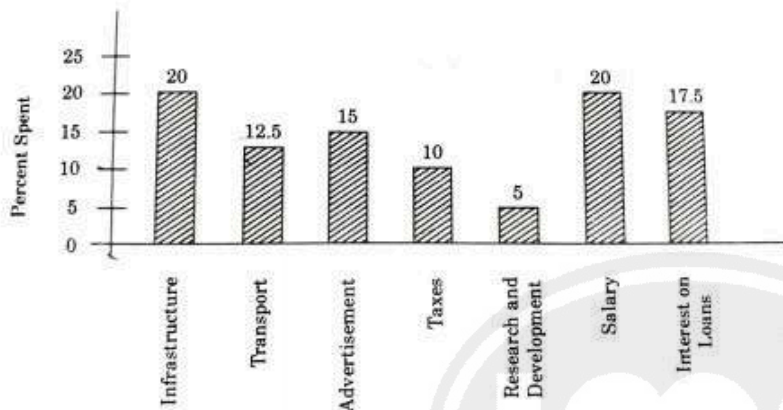
Correct Option: 312695

Candidate Response:

Question:

DIRECTIONS for Questions: The bar-graph given below shows the percentage distribution of total expenditures of a company under various expense heads during 2023. Study the graph and answer the questions that follow:

Percentage Distribution of Total Expenditures of a Company



Options:

Option ID: 312696 5 : 4

Option ID: 312697 8 : 7

Option ID: 312698 9 : 7

Option ID: 312699 13 : 11

Option ID: 312700 5 : 9

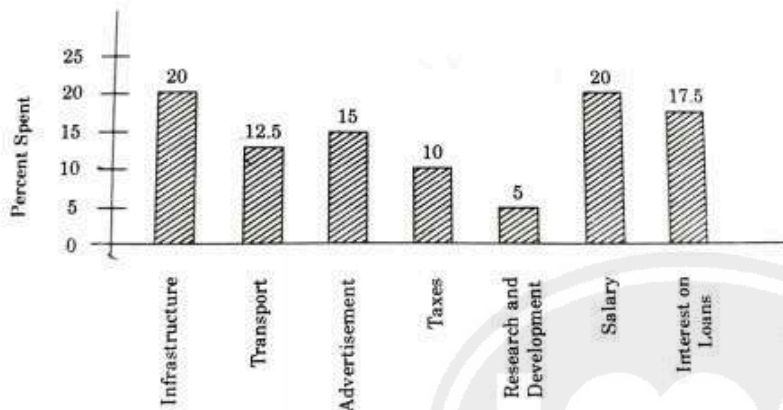
Correct Option: 312699

Candidate Response:

Question:

DIRECTIONS for Questions: The bar-graph given below shows the percentage distribution of total expenditures of a company under various expense heads during 2023. Study the graph and answer the questions that follow:

Percentage Distribution of Total Expenditures of a Company



Options:

Option ID: 312701 Rs. 1.25 crores

Option ID: 312702 Rs. 95 lakhs

Option ID: 312703 Rs. 65 lakhs

Option ID: 312704 Rs. 35 lakhs

Option ID: 312705 Rs. 25 lakhs

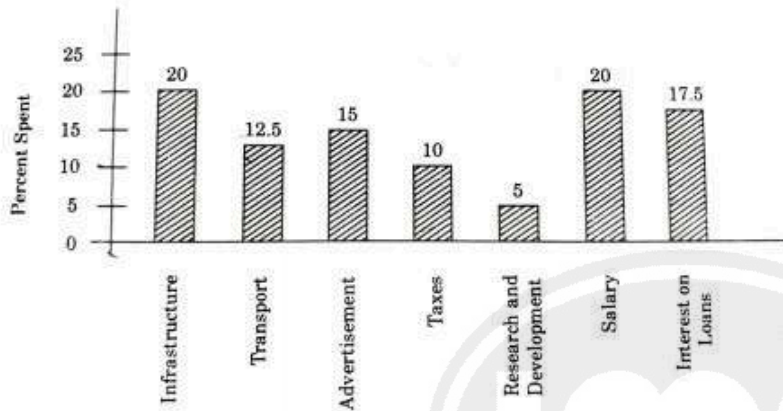
Correct Option: 312704

Candidate Response:

Question:

DIRECTIONS for Questions: The bar-graph given below shows the percentage distribution of total expenditures of a company under various expense heads during 2023. Study the graph and answer the questions that follow:

Percentage Distribution of Total Expenditures of a Company



Options:

Option ID: 312706 27

Option ID: 312707 20

Option ID: 312708 18

Option ID: 312709 8

Option ID: 312710 5

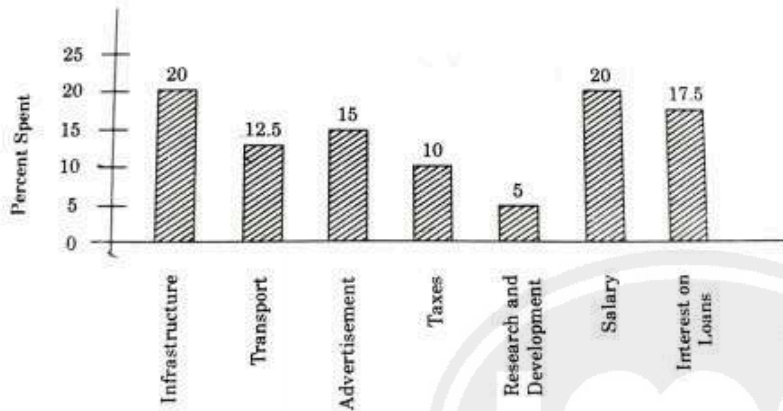
Correct Option: 312707

Candidate Response:

Question:

DIRECTIONS for Questions: The bar-graph given below shows the percentage distribution of total expenditures of a company under various expense heads during 2023. Study the graph and answer the questions that follow:

Percentage Distribution of Total Expenditures of a Company



Options:

Option ID: 312711 Rs. 7 crores

Option ID: 312712 Rs. 5.4 crores

Option ID: 312713 Rs. 4.2 crores

Option ID: 312714 Rs. 3 crores

Option ID: 312715 Rs. 2.4 crores

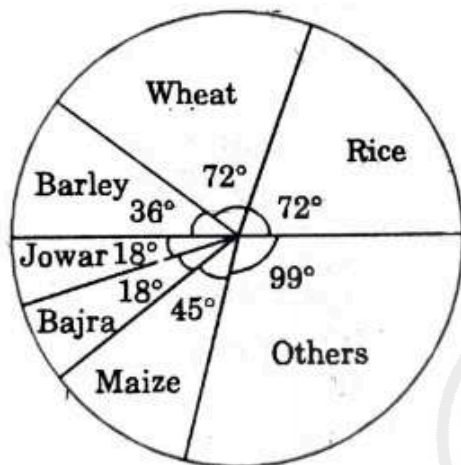
Correct Option: 312713

Candidate Response:

Question:

DIRECTIONS for Questions: The pie-chart provided below gives the distribution of land (in a village) under various food crops. Study the pie-chart carefully and answer the questions that follow.

Distribution of Areas (In Acres) under various food crops



Options:

Option ID: 312716 Wheat, Barley and Jowar

Option ID: 312717 Rice, Wheat and Jowar

Option ID: 312718 Rice, Wheat and Barley

Option ID: 312719 Bajra , Maize and Rice

Option ID: 312720 Barley, Jowar and Rice

Correct Option: 312718

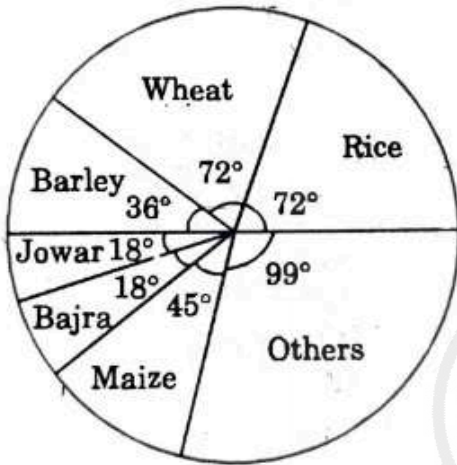
Candidate Response:

Q147 | ID: 203017 | Section: QUANTITATIVE APTITUDE

Question:

DIRECTIONS for Questions: The pie-chart provided below gives the distribution of land (in a village) under various food crops. Study the pie-chart carefully and answer the questions that follow.

Distribution of Areas (In Acres) under various food crops



Options:

Option ID: 312721 6

Trusted for Success

Option ID: 312722 7.5

Option ID: 312723 9

Option ID: 312724 4.5

Option ID: 312725 2

Correct Option: 312721

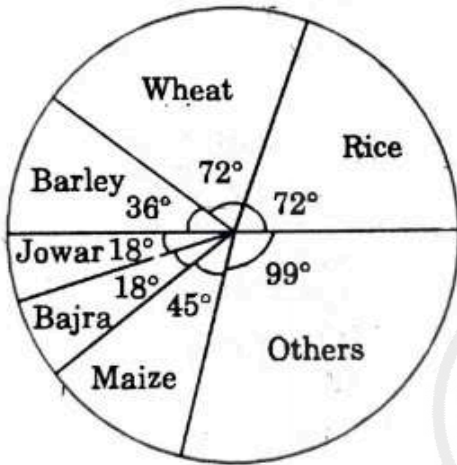
Candidate Response:

Q148 | ID: 203018 | Section: QUANTITATIVE APTITUDE

Question:

DIRECTIONS for Questions: The pie-chart provided below gives the distribution of land (in a village) under various food crops. Study the pie-chart carefully and answer the questions that follow.

Distribution of Areas (In Acres) under various food crops



Options:

Option ID: 312726 3 : 2

Option ID: 312727 3 : 1

Option ID: 312728 12 : 1

Option ID: 312729 2 : 3

Option ID: 312730 3 : 5

Correct Option: 312727

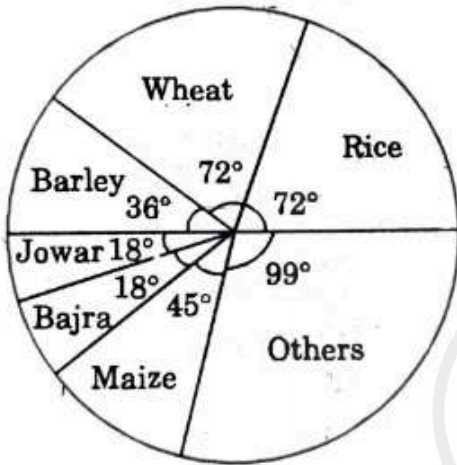
Candidate Response:

Q149 | ID: 203019 | Section: QUANTITATIVE APTITUDE

Question:

DIRECTIONS for Questions: The pie-chart provided below gives the distribution of land (in a village) under various food crops. Study the pie-chart carefully and answer the questions that follow.

Distribution of Areas (In Acres) under various food crops



Options:

Option ID: 312731 30%

Option ID: 312732 33.33%

Option ID: 312733 35.5%

Option ID: 312734 36%

Option ID: 312735 50.65%

Correct Option: 312732

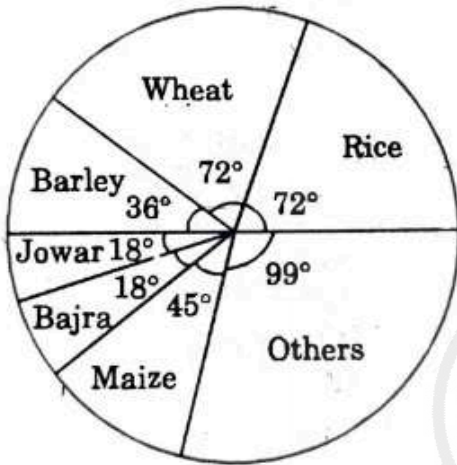
Candidate Response:

Q150 | ID: 203020 | Section: QUANTITATIVE APTITUDE

Question:

DIRECTIONS for Questions: The pie-chart provided below gives the distribution of land (in a village) under various food crops. Study the pie-chart carefully and answer the questions that follow.

Distribution of Areas (In Acres) under various food crops



Options:

Option ID: 312736 62.4°

Option ID: 312737 76.8°

Option ID: 312738 80.6°

Option ID: 312739 84.2°

Option ID: 312740 12.4°

Correct Option: 312737

Candidate Response:

Question:

Read the passage and answer the following questions

"Sarcasm is the lowest form of wit but the highest form of intelligence" wrote that _____ of wit, Oscar Wilde. Whether sarcasm is a sign of intelligence or not, communication experts and marriage counsellors alike typically advise us to stay away from this particular form of expression. The reason is simple: sarcasm expresses the poisonous sting of contempt, hurting others and harming relationships.

As a form of communication, sarcasm takes on the debt of conflict. And yet, our research suggests, there may also be some unexpected benefits from sarcasm, greater creativity. The use of sarcasm, in fact, promotes creativity for those on both the giving and receiving end of sarcastic exchanges. Instead of avoiding sarcasm completely in the office, the research suggests sarcasm, used with care and in moderation, can be effectively used and trigger some creative sparks. Sarcasm involves constructing or exposing contradictions between intended meanings.

The most common form of verbal irony, sarcasm is often used to humorously convey thinly veiled disapproval or scorn. "Pat, don't work so hard", a boss might say upon catching his assistant surfing the Internet. Early research on sarcasm explored how people interpret statements and found that, as expected, sarcasm makes a statement sound more critical. Participants rated sarcasm to be more condemning than literal statements. Why might sarcasm enhance creativity? Because the brain must think creatively to understand or convey a sarcastic comment, sarcasm may lead to clearer and more creative thinking.

To either create or understand sarcasm, tone must overcome the contradiction between the literal and actual meanings of the sarcastic expressions. Sarcasm is a process that activates, and is facilitated by, abstraction, which in turn promotes creative thinking. Consider the following example, which comes from a conversation one of my friends had a few weeks before getting married. His fiancée woke him up as he was soundly asleep at night to tell him about some new ideas she has for their upcoming wedding next month - many of which were quite expensive.

Options:

Option ID: 312741 censoring

Option ID: 312742 hurting

Option ID: 312743 killing

Option ID: 312744 shouting

Option ID: 312745 scolding

Correct Option: 312741

Candidate Response:



Trusted for Success

Question:

Read the passage and answer the following questions

"Sarcasm is the lowest form of wit but the highest form of intelligence" wrote that _____ of wit, Oscar Wilde. Whether sarcasm is a sign of intelligence or not, communication experts and marriage counsellors alike typically advise us to stay away from this particular form of expression. The reason is simple: sarcasm expresses the poisonous sting of contempt, hurting others and harming relationships.

As a form of communication, sarcasm takes on the debt of conflict. And yet, our research suggests, there may also be some unexpected benefits from sarcasm, greater creativity. The use of sarcasm, in fact, promotes creativity for those on both the giving and receiving end of sarcastic exchanges. Instead of avoiding sarcasm completely in the office, the research suggests sarcasm, used with care and in moderation, can be effectively used and trigger some creative sparks. Sarcasm involves constructing or exposing contradictions between intended meanings.

The most common form of verbal irony, sarcasm is often used to humorously convey thinly veiled disapproval or scorn. "Pat, don't work so hard", a boss might say upon catching his assistant surfing the Internet. Early research on sarcasm explored how people interpret statements and found that, as expected, sarcasm makes a statement sound more critical. Participants rated sarcasm to be more condemning than literal statements. Why might sarcasm enhance creativity? Because the brain must think creatively to understand or convey a sarcastic comment, sarcasm may lead to clearer and more creative thinking.

To either create or understand sarcasm, tone must overcome the contradiction between the literal and actual meanings of the sarcastic expressions. Sarcasm is a process that activates, and is facilitated by, abstraction, which in turn promotes creative thinking. Consider the following example, which comes from a conversation one of my friends had a few weeks before getting married. His fiancée woke him up as he was soundly asleep at night to tell him about some new ideas she has for their upcoming wedding next month - many of which were quite expensive.

Options:

Option ID: 312746 Sarcasm expresses the poisonous sting of contempt.

Option ID: 312747 Sarcasm hurts others and harms relationships.

Option ID: 312748 Sarcasm takes on the debt of conflict.

Option ID: 312749 There are some unexpected benefits from sarcasm.

Option ID: 312750 Sarcasm should be entirely avoided as it does not have any beneficial effects.

Correct Option: 312750

Candidate Response:



Trusted for Success

Question:

Read the passage and answer the following questions

"Sarcasm is the lowest form of wit but the highest form of intelligence" wrote that _____ of wit, Oscar Wilde. Whether sarcasm is a sign of intelligence or not, communication experts and marriage counsellors alike typically advise us to stay away from this particular form of expression. The reason is simple: sarcasm expresses the poisonous sting of contempt, hurting others and harming relationships.

As a form of communication, sarcasm takes on the debt of conflict. And yet, our research suggests, there may also be some unexpected benefits from sarcasm, greater creativity. The use of sarcasm, in fact, promotes creativity for those on both the giving and receiving end of sarcastic exchanges. Instead of avoiding sarcasm completely in the office, the research suggests sarcasm, used with care and in moderation, can be effectively used and trigger some creative sparks. Sarcasm involves constructing or exposing contradictions between intended meanings.

The most common form of verbal irony, sarcasm is often used to humorously convey thinly veiled disapproval or scorn. "Pat, don't work so hard", a boss might say upon catching his assistant surfing the Internet. Early research on sarcasm explored how people interpret statements and found that, as expected, sarcasm makes a statement sound more critical. Participants rated sarcasm to be more condemning than literal statements. Why might sarcasm enhance creativity? Because the brain must think creatively to understand or convey a sarcastic comment, sarcasm may lead to clearer and more creative thinking.

To either create or understand sarcasm, tone must overcome the contradiction between the literal and actual meanings of the sarcastic expressions. Sarcasm is a process that activates, and is facilitated by, abstraction, which in turn promotes creative thinking. Consider the following example, which comes from a conversation one of my friends had a few weeks before getting married. His fiancée woke him up as he was soundly asleep at night to tell him about some new ideas she has for their upcoming wedding next month - many of which were quite expensive.

Options:

Option ID: 312751 expert

Option ID: 312752 clown

Option ID: 312753 connoisseur

Option ID: 312754 personality

Option ID: 312755 player

Correct Option: 312753

Candidate Response:



Trusted for Success

Question:

Read the passage and answer the following questions

"Sarcasm is the lowest form of wit but the highest form of intelligence" wrote that _____ of wit, Oscar Wilde. Whether sarcasm is a sign of intelligence or not, communication experts and marriage counsellors alike typically advise us to stay away from this particular form of expression. The reason is simple: sarcasm expresses the poisonous sting of contempt, hurting others and harming relationships.

As a form of communication, sarcasm takes on the debt of conflict. And yet, our research suggests, there may also be some unexpected benefits from sarcasm, greater creativity. The use of sarcasm, in fact, promotes creativity for those on both the giving and receiving end of sarcastic exchanges. Instead of avoiding sarcasm completely in the office, the research suggests sarcasm, used with care and in moderation, can be effectively used and trigger some creative sparks. Sarcasm involves constructing or exposing contradictions between intended meanings.

The most common form of verbal irony, sarcasm is often used to humorously convey thinly veiled disapproval or scorn. "Pat, don't work so hard", a boss might say upon catching his assistant surfing the Internet. Early research on sarcasm explored how people interpret statements and found that, as expected, sarcasm makes a statement sound more critical. Participants rated sarcasm to be more condemning than literal statements. Why might sarcasm enhance creativity? Because the brain must think creatively to understand or convey a sarcastic comment, sarcasm may lead to clearer and more creative thinking.

To either create or understand sarcasm, tone must overcome the contradiction between the literal and actual meanings of the sarcastic expressions. Sarcasm is a process that activates, and is facilitated by, abstraction, which in turn promotes creative thinking. Consider the following example, which comes from a conversation one of my friends had a few weeks before getting married. His fiancée woke him up as he was soundly asleep at night to tell him about some new ideas she has for their upcoming wedding next month - many of which were quite expensive.

Options:

Option ID: 312756 Only A

Option ID: 312757 Only B and C

Option ID: 312758 Only D

Option ID: 312759 Only E

Option ID: 312760 Only C

Correct Option: 312757

Candidate Response:



Trusted for Success

Question:

Read the passage and answer the following questions

"Sarcasm is the lowest form of wit but the highest form of intelligence" wrote that _____ of wit, Oscar Wilde. Whether sarcasm is a sign of intelligence or not, communication experts and marriage counsellors alike typically advise us to stay away from this particular form of expression. The reason is simple: sarcasm expresses the poisonous sting of contempt, hurting others and harming relationships.

As a form of communication, sarcasm takes on the debt of conflict. And yet, our research suggests, there may also be some unexpected benefits from sarcasm, greater creativity. The use of sarcasm, in fact, promotes creativity for those on both the giving and receiving end of sarcastic exchanges. Instead of avoiding sarcasm completely in the office, the research suggests sarcasm, used with care and in moderation, can be effectively used and trigger some creative sparks. Sarcasm involves constructing or exposing contradictions between intended meanings.

The most common form of verbal irony, sarcasm is often used to humorously convey thinly veiled disapproval or scorn. "Pat, don't work so hard", a boss might say upon catching his assistant surfing the Internet. Early research on sarcasm explored how people interpret statements and found that, as expected, sarcasm makes a statement sound more critical. Participants rated sarcasm to be more condemning than literal statements. Why might sarcasm enhance creativity? Because the brain must think creatively to understand or convey a sarcastic comment, sarcasm may lead to clearer and more creative thinking.

To either create or understand sarcasm, tone must overcome the contradiction between the literal and actual meanings of the sarcastic expressions. Sarcasm is a process that activates, and is facilitated by, abstraction, which in turn promotes creative thinking. Consider the following example, which comes from a conversation one of my friends had a few weeks before getting married. His fiancée woke him up as he was soundly asleep at night to tell him about some new ideas she has for their upcoming wedding next month - many of which were quite expensive.

Options:

Option ID: 312761 The brain must think creatively to understand or convey a sarcastic comment.

Option ID: 312762 Sarcasm makes a statement sound less critical.

Option ID: 312763 Sarcasm may lead to clearer and more creative thinking.

Option ID: 312764 To either create or understand sarcasm, tone must overcome the contradiction between the literal and actual meanings of the sarcastic expressions.

Option ID: 312765 Sarcasm is a process that activates, and is facilitated by, abstraction, which in turn promotes creative thinking.

Correct Option: 312762

Candidate Response:



Trusted for Success

Question:

Read the passage given below carefully and answer the question that follows:

A majority of Indians prefer to use the internet for accessing banking and other financial services than shopping online, shows a new survey. Almost 57% of Indian respondents using the internet prefer to bank online and use other financial services due to hassle-free access and time saving features of online banking according to the survey.

Checking information on products and services online comes a close second at 53% while 50% shop for products online. The fourth on the list-around 42% of respondents in India surfed online to look for jobs, the survey said.

Online banking has made things much easier for the people and it saves a lot of time. It has eliminated the problems associated with traditional way of banking where one had to stand in a queue and fill up several forms. Most of the banks in India have introduced customer-friendly on-line banking facility with advanced security features to protect customers against cybercrime. The easy registration process for net banking has improved customers' access to several banking products increased customer loyalty, facilitated money transfer to any bank across India and has helped banks-attract new customers.

The Indian results closely track the global trends as well conducted among 18216 people from 24 countries, the survey showed that banking, keeping track of finances and searching for jobs are the main tasks of internet users around the globe. Overall, 60% of people surveyed used the internet to check their bank account and other financial assets in the past 90 days, making it the most popular use of the internet globally, shopping was not too far behind at 48%, 41 % went on line to search for a job as per the survey, almost 90% of respondents in Sweden use e-banking.

Online banking has also caught on in a big way in nations like France, Canada, Australia, Poland, South Africa and Belgium. The Germans and British are at the top for doing online shopping with 74% of respondents in both countries having bought something online in the past three months. They are followed by 68% of respondents in Sweden. 65% in US and 62% in South Korea.

Options:

Option ID: 312766 Internet users across the globe are mainly interested in looking for jobs and keeping track of finances

Option ID: 312767 Germany and Great Britain are the top countries where online shopping is quite popular

Option ID: 312768 Many people in Sweden use e-banking to maintain their finances

Option ID: 312769 A majority of Indians prefer shopping online as compared to other online activities

Option ID: 312770 Most of the banks in India have introduced customer-friendly on-line banking facility with advanced security features to protect customers against cybercrime

Correct Option: 312769

Candidate Response:



Trusted for Success

Question:

Read the passage given below carefully and answer the question that follows:

A majority of Indians prefer to use the internet for accessing banking and other financial services than shopping online, shows a new survey. Almost 57% of Indian respondents using the internet prefer to bank online and use other financial services due to hassle-free access and time saving features of online banking according to the survey.

Checking information on products and services online comes a close second at 53% while 50% shop for products online. The fourth on the list-around 42% of respondents in India surfed online to look for jobs, the survey said.

Online banking has made things much easier for the people and it saves a lot of time. It has eliminated the problems associated with traditional way of banking where one had to stand in a queue and fill up several forms. Most of the banks in India have introduced customer-friendly on-line banking facility with advanced security features to protect customers against cybercrime. The easy registration process for net banking has improved customers' access to several banking products increased customer loyalty, facilitated money transfer to any bank across India and has helped banks-attract new customers.

The Indian results closely track the global trends as well conducted among 18216 people from 24 countries, the survey showed that banking, keeping track of finances and searching for jobs are the main tasks of internet users around the globe. Overall, 60% of people surveyed used the internet to check their bank account and other financial assets in the past 90 days, making it the most popular use of the internet globally, shopping was not too far behind at 48%, 41 % went on line to search for a job as per the survey, almost 90% of respondents in Sweden use e-banking.

Online banking has also caught on in a big way in nations like France, Canada, Australia, Poland, South Africa and Belgium. The Germans and British are at the top for doing online shopping with 74% of respondents in both countries having bought something online in the past three months. They are followed by 68% of respondents in Sweden. 65% in US and 62% in South Korea.

Options:

Option ID: 312771 Banks are successful in attracting more customers due to better training provided to sales staff

Option ID: 312772 Easy registration process for net banking

Option ID: 312773 Opening more branches at more locations

Option ID: 312774 Providing higher interest rates on fixed deposits

Option ID: 312775 Providing loans at low interest rates

Correct Option: 312772

Candidate Response:



Trusted for Success

Question:

Read the passage given below carefully and answer the question that follows:

A majority of Indians prefer to use the internet for accessing banking and other financial services than shopping online, shows a new survey. Almost 57% of Indian respondents using the internet prefer to bank online and use other financial services due to hassle-free access and time saving features of online banking according to the survey.

Checking information on products and services online comes a close second at 53% while 50% shop for products online. The fourth on the list-around 42% of respondents in India surfed online to look for jobs, the survey said.

Online banking has made things much easier for the people and it saves a lot of time. It has eliminated the problems associated with traditional way of banking where one had to stand in a queue and fill up several forms. Most of the banks in India have introduced customer-friendly on-line banking facility with advanced security features to protect customers against cybercrime. The easy registration process for net banking has improved customers' access to several banking products increased customer loyalty, facilitated money transfer to any bank across India and has helped banks-attract new customers.

The Indian results closely track the global trends as well conducted among 18216 people from 24 countries, the survey showed that banking, keeping track of finances and searching for jobs are the main tasks of internet users around the globe. Overall, 60% of people surveyed used the internet to check their bank account and other financial assets in the past 90 days, making it the most popular use of the internet globally, shopping was not too far behind at 48%, 41 % went on line to search for a job as per the survey, almost 90% of respondents in Sweden use e-banking.

Online banking has also caught on in a big way in nations like France, Canada, Australia, Poland, South Africa and Belgium. The Germans and British are at the top for doing online shopping with 74% of respondents in both countries having bought something online in the past three months. They are followed by 68% of respondents in Sweden. 65% in US and 62% in South Korea.

Options:

Option ID: 312776 Banking transactions

Option ID: 312777 Searching for jobs

Option ID: 312778 Online shopping

Option ID: 312779 Social networking

Option ID: 312780 Entertainment

Correct Option: 312778

Candidate Response:



Trusted for Success

Question:

Read the passage given below carefully and answer the question that follows:

A majority of Indians prefer to use the internet for accessing banking and other financial services than shopping online, shows a new survey. Almost 57% of Indian respondents using the internet prefer to bank online and use other financial services due to hassle-free access and time saving features of online banking according to the survey.

Checking information on products and services online comes a close second at 53% while 50% shop for products online. The fourth on the list-around 42% of respondents in India surfed online to look for jobs, the survey said.

Online banking has made things much easier for the people and it saves a lot of time. It has eliminated the problems associated with traditional way of banking where one had to stand in a queue and fill up several forms. Most of the banks in India have introduced customer-friendly on-line banking facility with advanced security features to protect customers against cybercrime. The easy registration process for net banking has improved customers' access to several banking products increased customer loyalty, facilitated money transfer to any bank across India and has helped banks-attract new customers.

The Indian results closely track the global trends as well conducted among 18216 people from 24 countries, the survey showed that banking, keeping track of finances and searching for jobs are the main tasks of internet users around the globe. Overall, 60% of people surveyed used the internet to check their bank account and other financial assets in the past 90 days, making it the most popular use of the internet globally, shopping was not too far behind at 48%, 41 % went on line to search for a job as per the survey, almost 90% of respondents in Sweden use e-banking.

Online banking has also caught on in a big way in nations like France, Canada, Australia, Poland, South Africa and Belgium. The Germans and British are at the top for doing online shopping with 74% of respondents in both countries having bought something online in the past three months. They are followed by 68% of respondents in Sweden. 65% in US and 62% in South Korea.

Options:

Option ID: 312781 Unskilled

Option ID: 312782 Negotiable

Option ID: 312783 Subtle

Option ID: 312784 Notable

Option ID: 312785 Not annoying

Correct Option: 312785

Candidate Response:



Trusted for Success

Question:

Read the passage given below carefully and answer the question that follows:

A majority of Indians prefer to use the internet for accessing banking and other financial services than shopping online, shows a new survey. Almost 57% of Indian respondents using the internet prefer to bank online and use other financial services due to hassle-free access and time saving features of online banking according to the survey.

Checking information on products and services online comes a close second at 53% while 50% shop for products online. The fourth on the list-around 42% of respondents in India surfed online to look for jobs, the survey said.

Online banking has made things much easier for the people and it saves a lot of time. It has eliminated the problems associated with traditional way of banking where one had to stand in a queue and fill up several forms. Most of the banks in India have introduced customer-friendly on-line banking facility with advanced security features to protect customers against cybercrime. The easy registration process for net banking has improved customers' access to several banking products increased customer loyalty, facilitated money transfer to any bank across India and has helped banks-attract new customers.

The Indian results closely track the global trends as well conducted among 18216 people from 24 countries, the survey showed that banking, keeping track of finances and searching for jobs are the main tasks of internet users around the globe. Overall, 60% of people surveyed used the internet to check their bank account and other financial assets in the past 90 days, making it the most popular use of the internet globally, shopping was not too far behind at 48%, 41 % went on line to search for a job as per the survey, almost 90% of respondents in Sweden use e-banking.

Online banking has also caught on in a big way in nations like France, Canada, Australia, Poland, South Africa and Belgium. The Germans and British are at the top for doing online shopping with 74% of respondents in both countries having bought something online in the past three months. They are followed by 68% of respondents in Sweden. 65% in US and 62% in South Korea.

Options:

Option ID: 312786 It has increased the number of cybercrimes

Option ID: 312787 It has made lives easier than before

Option ID: 312788 Internet is most popular for online shopping

Option ID: 312789 The registration process for netbanking is difficult, yet people prefer online banking than traditional banking

Option ID: 312790 It is more popular for online shopping than anything else

Correct Option: 312787

Candidate Response:



Trusted for Success

Question:

Read the passage given below carefully and answer the question that follows:

The Voice (of Mahatma Gandhi) gave a message to the country that it needed greatly. It brought to the common people a realization of their duty to concern themselves with their affairs, it had to be listened to not only on account of its form but also for the matter which it delivered. The common people were made to take an interest in the matter in which they were governed, in the taxes they paid, in the return they got from those taxes. This interest in public affairs - politics as you may call it - was to be the concern no longer of the highly educated few but of the many the poor, the property less, the working men in town and country. Politics was not to be the concern of a small aristocracy of intellect or property of the masses. And with the change in the subjects of politics that Voice brought about also a change in the object of politics.

Till then politics had busied itself with the machinery of government towards making its personnel more and more native with proposals for a better distribution of political power, with protests against the sins of omission and commission of the administration. This voice switched politics on to concern for the needs of the common people. The improvement of the lot of the poor was to be the main concern of politics and the politician. The improvement especially of the lives of the people of the neglected villages, was to be placed before governments and political organisation as the goal of all political

The raising of the standard of living of the people of the villages the finding of subsidiary occupations which would give the agricultural poor work for their enforced leisure during the off season and an addition to their exiguous income housing of the poor, the sanitation of the villages these were to be the objectives to be kept in view in the towns the slums and shanties were to receive a special attention. There was especially a class of the poor for which that compassionate voice pleaded and protested.

Options:

Option ID: 312791 the poor

Option ID: 312792 the property less

Option ID: 312793 the working men in town and country

Option ID: 312794 the common people

Option ID: 312795 the aristocracy

Correct Option: 312795

Candidate Response:



Trusted for Success

Question:

Read the passage given below carefully and answer the question that follows:

The Voice (of Mahatma Gandhi) gave a message to the country that it needed greatly. It brought to the common people a realization of their duty to concern themselves with their affairs, it had to be listened to not only on account of its form but also for the matter which it delivered. The common people were made to take an interest in the matter in which they were governed, in the taxes they paid, in the return they got from those taxes. This interest in public affairs - politics as you may call it - was to be the concern no longer of the highly educated few but of the many the poor, the property less, the working men in town and country. Politics was not to be the concern of a small aristocracy of intellect or property of the masses. And with the change in the subjects of politics that Voice brought about also a change in the object of politics.

Till then politics had busied itself with the machinery of government towards making its personnel more and more native with proposals for a better distribution of political power, with protests against the sins of omission and commission of the administration. This voice switched politics on to concern for the needs of the common people. The improvement of the lot of the poor was to be the main concern of politics and the politician. The improvement especially of the lives of the people of the neglected villages, was to be placed before governments and political organisation as the goal of all political

The raising of the standard of living of the people of the villages the finding of subsidiary occupations which would give the agricultural poor work for their enforced leisure during the off season and an addition to their exiguous income housing of the poor, the sanitation of the villages these were to be the objectives to be kept in view in the towns the slums and shanties were to receive a special attention. There was especially a class of the poor for which that compassionate voice pleaded and protested.

Options:

Option ID: 312796 making the government personnel more and more native

Option ID: 312797 concern for the needs of the common people

Option ID: 312798 proposals for better distribution of political power

Option ID: 312799 protests against the sins of omission of the administration.

Option ID: 312800 protests against the sins of commission of the administration.

Correct Option: 312797

Candidate Response:



Trusted for Success

Question:

Read the passage given below carefully and answer the question that follows:

The Voice (of Mahatma Gandhi) gave a message to the country that it needed greatly. It brought to the common people a realization of their duty to concern themselves with their affairs, it had to be listened to not only on account of its form but also for the matter which it delivered. The common people were made to take an interest in the matter in which they were governed, in the taxes they paid, in the return they got from those taxes. This interest in public affairs - politics as you may call it - was to be the concern no longer of the highly educated few but of the many the poor, the property less, the working men in town and country. Politics was not to be the concern of a small aristocracy of intellect or property of the masses. And with the change in the subjects of politics that Voice brought about also a change in the object of politics.

Till then politics had busied itself with the machinery of government towards making its personnel more and more native with proposals for a better distribution of political power, with protests against the sins of omission and commission of the administration. This voice switched politics on to concern for the needs of the common people. The improvement of the lot of the poor was to be the main concern of politics and the politician. The improvement especially of the lives of the people of the neglected villages, was to be placed before governments and political organisation as the goal of all political

The raising of the standard of living of the people of the villages the finding of subsidiary occupations which would give the agricultural poor work for their enforced leisure during the off season and an addition to their exiguous income housing of the poor, the sanitation of the villages these were to be the objectives to be kept in view in the towns the slums and shanties were to receive a special attention. There was especially a class of the poor for which that compassionate voice pleaded and protested.

Options:

Option ID: 312801 The improvement especially of the lives of the people of the neglected villages

Option ID: 312802 The raising of the standard of living of the people of the villages

Option ID: 312803 Taxes for common people

Option ID: 312804 The sanitation of the villages

Option ID: 312805 The finding of subsidiary occupations which would give the agricultural poor work for their enforced leisure during the off season

Correct Option: 312803

Candidate Response:



Trusted for Success

Question:

Read the passage given below carefully and answer the question that follows:

The Voice (of Mahatma Gandhi) gave a message to the country that it needed greatly. It brought to the common people a realization of their duty to concern themselves with their affairs, it had to be listened to not only on account of its form but also for the matter which it delivered. The common people were made to take an interest in the matter in which they were governed, in the taxes they paid, in the return they got from those taxes. This interest in public affairs - politics as you may call it - was to be the concern no longer of the highly educated few but of the many the poor, the property less, the working men in town and country. Politics was not to be the concern of a small aristocracy of intellect or property of the masses. And with the change in the subjects of politics that Voice brought about also a change in the object of politics.

Till then politics had busied itself with the machinery of government towards making its personnel more and more native with proposals for a better distribution of political power, with protests against the sins of omission and commission of the administration. This voice switched politics on to concern for the needs of the common people. The improvement of the lot of the poor was to be the main concern of politics and the politician. The improvement especially of the lives of the people of the neglected villages, was to be placed before governments and political organisation as the goal of all political

The raising of the standard of living of the people of the villages the finding of subsidiary occupations which would give the agricultural poor work for their enforced leisure during the off season and an addition to their exiguous income housing of the poor, the sanitation of the villages these were to be the objectives to be kept in view in the towns the slums and shanties were to receive a special attention. there was especially a class of the poor for which that compassionate voice pleaded and protested.

Options:

Option ID: 312806 People listened to the voice because it was aimed at the government machinery

Option ID: 312807 People listened to the voice because it gave a strong message to the aristocracy

Option ID: 312808 People listened to the voice because it gave a trivial message.

Option ID: 312809 People listened to the voice not only on account of its form, but also for the matter that it delivered

Option ID: 312810 People listened to the voice because it propagated for better distribution of political power

Correct Option: 312809

Candidate Response:



Trusted for Success

Question:

Read the passage given below carefully and answer the question that follows:

The Voice (of Mahatma Gandhi) gave a message to the country that it needed greatly. It brought to the common people a realization of their duty to concern themselves with their affairs, it had to be listened to not only on account of its form but also for the matter which it delivered. The common people were made to take an interest in the matter in which they were governed, in the taxes they paid, in the return they got from those taxes. This interest in public affairs - politics as you may call it - was to be the concern no longer of the highly educated few but of the many the poor, the property less, the working men in town and country. Politics was not to be the concern of a small aristocracy of intellect or property of the masses. And with the change in the subjects of politics that Voice brought about also a change in the object of politics.

Till then politics had busied itself with the machinery of government towards making its personnel more and more native with proposals for a better distribution of political power, with protests against the sins of omission and commission of the administration. This voice switched politics on to concern for the needs of the common people. The improvement of the lot of the poor was to be the main concern of politics and the politician. The improvement especially of the lives of the people of the neglected villages, was to be placed before governments and political organisation as the goal of all political

The raising of the standard of living of the people of the villages the finding of subsidiary occupations which would give the agricultural poor work for their enforced leisure during the off season and an addition to their exiguous income housing of the poor, the sanitation of the villages these were to be the objectives to be kept in view in the towns the slums and shanties were to receive a special attention. there was especially a class of the poor for which that compassionate voice pleaded and protested.

Options:

Option ID: 312811 strife

Option ID: 312812 endeavour

Option ID: 312813 methods

Option ID: 312814 studies

Option ID: 312815 science

Correct Option: 312812

Candidate Response:



Trusted for Success

Question:

Read the passage given below carefully and answer the question that follows:

Supposing you have to make a payment of Rs 100, you can do so in Rupee coins but it would be cumbersome to pay in nickel or copper coins, because they are heavy to carry and also because it takes much time to count them. The Government therefore permits you to make the payment in Rupee-notes. What are these Rupee notes really? They are a kind of money, right enough although they are made of paper instead of metal. You can use them in just the same way that you use ordinary money. The reason why they are made of paper and used in that they save the trouble of carrying metal coins about-of course, paper is lighter than metal- and they also save using silver and other metals when they are scarce.

What makes these mere pieces of paper bear the value of the number of Rupees that is printed upon them? Why should a piece of paper, with "100" printed on it be worth twenty times as much as a piece of paper with "five" printed on it – and also worth a hundred times as much as a silver Rupee- coin? The reason is that Government _____ that the piece of paper is worth the amount printed on it and promises to pay that amount to anybody who wishes to exchange this paper for the Rupee-coins. Also, if you think about it you can easily realize that crores and crores more of Rupee-coins would have to be minted if all paper money were abolished.

Perhaps, you may ask, "Then why not have paper money only? Why use silver and nickel and copper at all?" The answer is -because money must as we have already said, be something so useful that everyone wants. Also, because the metals are the best form of money; and thirdly because it would be impossible to print just the right amount of paper money that would keep prices at their proper natural level. If any Government prints too much paper money, then prices go up at once. The supply of money is increased and therefore its value (in food, clothes, books, houses, land, tools and everything else) goes down.

You may think at first that it is queer to talk of having too much paper money and that money is so nice and useful that you cannot have too much of it. But if you think that, I am afraid you are forgetting that money is only useful for what it will buy so it is no good at all having more money if there are no more things to buy with it the more money there is, the higher will be the prices of everything. The same thing happens with Rupee -coins as with paper money. But it is not likely to happen, for this reason: it is very easy to print a great deal of paper money, but not at all easy to increase the number of Rupee-coins.

Options:

Option ID: 312816 Paper money is guaranteed by the government.

Option ID: 312817 Paper money is easier to carry and count.

Option ID: 312818 Paper is the more durable form of currency.

Option ID: 312819 Paper money is the acceptable form of payment in every transaction.

Option ID: 312820 It is not easy to print a great deal of paper money.

Correct Option: 312817

Candidate Response:



Trusted for Success

Question:

Read the passage given below carefully and answer the question that follows:

Supposing you have to make a payment of Rs 100, you can do so in Rupee coins but it would be cumbersome to pay in nickel or copper coins, because they are heavy to carry and also because it takes much time to count them. The Government therefore permits you to make the payment in Rupee-notes. What are these Rupee notes really? They are a kind of money, right enough although they are made of paper instead of metal. You can use them in just the same way that you use ordinary money. The reason why they are made of paper and used in that they save the trouble of carrying metal coins about-of course, paper is lighter than metal- and they also save using silver and other metals when they are scarce.

What makes these mere pieces of paper bear the value of the number of Rupees that is printed upon them? Why should a piece of paper, with "100" printed on it be worth twenty times as much as a piece of paper with "five" printed on it – and also worth a hundred times as much as a silver Rupee- coin? The reason is that Government _____ that the piece of paper is worth the amount printed on it and promises to pay that amount to anybody who wishes to exchange this paper for the Rupee-coins. Also, if you think about it you can easily realize that crores and crores more of Rupee-coins would have to be minted if all paper money were abolished.

Perhaps, you may ask, "Then why not have paper money only? Why use silver and nickel and copper at all?" The answer is -because money must as we have already said, be something so useful that everyone wants. Also, because the metals are the best form of money; and thirdly because it would be impossible to print just the right amount of paper money that would keep prices at their proper natural level. If any Government prints too much paper money, then prices go up at once. The supply of money is increased and therefore its value (in food, clothes, books, houses, land, tools and everything else) goes down.

You may think at first that it is queer to talk of having too much paper money and that money is so nice and useful that you cannot have too much of it. But if you think that, I am afraid you are forgetting that money is only useful for what it will buy so it is no good at all having more money if there are no more things to buy with it the more money there is, the higher will be the prices of everything. The same thing happens with Rupee -coins as with paper money. But it is not likely to happen, for this reason: it is very easy to print a great deal of paper money, but not at all easy to increase the number of Rupee-coins.

Options:

Option ID: 312821 Carrying money would become heavier

Option ID: 312822 Money transactions will become easier


Option ID: 312823 Minting money will become difficult

Option ID: 312824 Making payments will become cumbersome

Option ID: 312825 Crores and crores of rupee coins would have to be maintained

Correct Option: 312822

Candidate Response:



Trusted for Success

Question:

Read the passage given below carefully and answer the question that follows:

Supposing you have to make a payment of Rs 100, you can do so in Rupee coins but it would be cumbersome to pay in nickel or copper coins, because they are heavy to carry and also because it takes much time to count them. The Government therefore permits you to make the payment in Rupee-notes. What are these Rupee notes really? They are a kind of money, right enough although they are made of paper instead of metal. You can use them in just the same way that you use ordinary money. The reason why they are made of paper and used in that they save the trouble of carrying metal coins about-of course, paper is lighter than metal- and they also save using silver and other metals when they are scarce.

What makes these mere pieces of paper bear the value of the number of Rupees that is printed upon them? Why should a piece of paper, with "100" printed on it be worth twenty times as much as a piece of paper with "five" printed on it – and also worth a hundred times as much as a silver Rupee- coin? The reason is that Government _____ that the piece of paper is worth the amount printed on it and promises to pay that amount to anybody who wishes to exchange this paper for the Rupee-coins. Also, if you think about it you can easily realize that crores and crores more of Rupee-coins would have to be minted if all paper money were abolished.

Perhaps, you may ask, "Then why not have paper money only? Why use silver and nickel and copper at all?" The answer is -because money must as we have already said, be something so useful that everyone wants. Also, because the metals are the best form of money; and thirdly because it would be impossible to print just the right amount of paper money that would keep prices at their proper natural level. If any Government prints too much paper money, then prices go up at once. The supply of money is increased and therefore its value (in food, clothes, books, houses, land, tools and everything else) goes down.

You may think at first that it is queer to talk of having too much paper money and that money is so nice and useful that you cannot have too much of it. But if you think that, I am afraid you are forgetting that money is only useful for what it will buy so it is no good at all having more money if there are no more things to buy with it the more money there is, the higher will be the prices of everything. The same thing happens with Rupee -coins as with paper money. But it is not likely to happen, for this reason: it is very easy to print a great deal of paper money, but not at all easy to increase the number of Rupee-coins.

Options:

Option ID: 312826 Printing paper money is easier than minting coins.

Option ID: 312827 Silver, nickel and copper coins are the best form of payment for large transactions.


Option ID: 312828 It is impossible to print just the right amount of paper money that would keep prices at their proper natural level.

Option ID: 312829 Paper money depreciates in value faster as compared to silver, nickel and copper coins.

Option ID: 312830 Paper money can be easily counterfeited.

Correct Option: 312828

Candidate Response:



Trusted for Success

Question:

Read the passage given below carefully and answer the question that follows:

Supposing you have to make a payment of Rs 100, you can do so in Rupee coins but it would be cumbersome to pay in nickel or copper coins, because they are heavy to carry and also because it takes much time to count them. The Government therefore permits you to make the payment in Rupee-notes. What are these Rupee notes really? They are a kind of money, right enough although they are made of paper instead of metal. You can use them in just the same way that you use ordinary money. The reason why they are made of paper and used in that they save the trouble of carrying metal coins about-of course, paper is lighter than metal- and they also save using silver and other metals when they are scarce.

What makes these mere pieces of paper bear the value of the number of Rupees that is printed upon them? Why should a piece of paper, with "100" printed on it be worth twenty times as much as a piece of paper with "five" printed on it – and also worth a hundred times as much as a silver Rupee- coin? The reason is that Government _____ that the piece of paper is worth the amount printed on it and promises to pay that amount to anybody who wishes to exchange this paper for the Rupee-coins. Also, if you think about it you can easily realize that crores and crores more of Rupee-coins would have to be minted if all paper money were abolished.

Perhaps, you may ask, "Then why not have paper money only? Why use silver and nickel and copper at all?" The answer is -because money must as we have already said, be something so useful that everyone wants. Also, because the metals are the best form of money; and thirdly because it would be impossible to print just the right amount of paper money that would keep prices at their proper natural level. If any Government prints too much paper money, then prices go up at once. The supply of money is increased and therefore its value (in food, clothes, books, houses, land, tools and everything else) goes down.

You may think at first that it is queer to talk of having too much paper money and that money is so nice and useful that you cannot have too much of it. But if you think that, I am afraid you are forgetting that money is only useful for what it will buy so it is no good at all having more money if there are no more things to buy with it the more money there is, the higher will be the prices of everything. The same thing happens with Rupee -coins as with paper money. But it is not likely to happen, for this reason: it is very easy to print a great deal of paper money, but not at all easy to increase the number of Rupee-coins.

Options:

Option ID: 312831 Money is only useful for what it will buy

Option ID: 312832 The more money there is, the lower will be the prices of everything.


Option ID: 312833 It is very easy to print a great deal of paper money

Option ID: 312834 It is not at all easy to increase the number of Rupee-coins.

Option ID: 312835 It is no good at all having more money if there are no more things to buy with it

Correct Option: 312832

Candidate Response:



Trusted for Success

Question:

Read the passage given below carefully and answer the question that follows:

Supposing you have to make a payment of Rs 100, you can do so in Rupee coins but it would be cumbersome to pay in nickel or copper coins, because they are heavy to carry and also because it takes much time to count them. The Government therefore permits you to make the payment in Rupee-notes. What are these Rupee notes really? They are a kind of money, right enough although they are made of paper instead of metal. You can use them in just the same way that you use ordinary money. The reason why they are made of paper and used in that they save the trouble of carrying metal coins about-of course, paper is lighter than metal- and they also save using silver and other metals when they are scarce.

What makes these mere pieces of paper bear the value of the number of Rupees that is printed upon them? Why should a piece of paper, with "100" printed on it be worth twenty times as much as a piece of paper with "five" printed on it – and also worth a hundred times as much as a silver Rupee- coin? The reason is that Government _____ that the piece of paper is worth the amount printed on it and promises to pay that amount to anybody who wishes to exchange this paper for the Rupee-coins. Also, if you think about it you can easily realize that crores and crores more of Rupee-coins would have to be minted if all paper money were abolished.

Perhaps, you may ask, "Then why not have paper money only? Why use silver and nickel and copper at all?" The answer is -because money must as we have already said, be something so useful that everyone wants. Also, because the metals are the best form of money; and thirdly because it would be impossible to print just the right amount of paper money that would keep prices at their proper natural level. If any Government prints too much paper money, then prices go up at once. The supply of money is increased and therefore its value (in food, clothes, books, houses, land, tools and everything else) goes down.

You may think at first that it is queer to talk of having too much paper money and that money is so nice and useful that you cannot have too much of it. But if you think that, I am afraid you are forgetting that money is only useful for what it will buy so it is no good at all having more money if there are no more things to buy with it the more money there is, the higher will be the prices of everything. The same thing happens with Rupee -coins as with paper money. But it is not likely to happen, for this reason: it is very easy to print a great deal of paper money, but not at all easy to increase the number of Rupee-coins.

Options:

Option ID: 312836 decides

Option ID: 312837 assumes

Option ID: 312838 discovers

Option ID: 312839 guarantees

Option ID: 312840 realises

Correct Option: 312839

Candidate Response:



Trusted for Success

Question:

This passage consists of jumbled up sentences / parts of sentence. Rearrange the sentences as per the proper order and identify the third sentence after rearrangement

- a. everybody had exactly the same amount of money,
- b. however, they forget that very few people would work at all,
- c. One common mistake that many people have made is that,
- d. if it were not for the money their work brings them,
- e. they think it would be a very good thing if
- f. and that without work there would be no money
- g. no matter whether they worked hard or lived idly,

Options:

Option ID: 312841 a

Option ID: 312842 b

Option ID: 312843 d

Option ID: 312844 f

Option ID: 312845 g

Correct Option: 312841

Candidate Response:



Trusted for Success

Question:

This passage consists of jumbled up sentences / parts of sentence. Rearrange the sentences as per the proper order and identify the sixth sentence after rearrangement.

- a. everybody had exactly the same amount of money,
- b. however, they forget that very few people would work at all,
- c. One common mistake that many people have made is that,
- d. if it were not for the money their work brings them,
- e. they think it would be a very good thing if
- f. and that without work there would be no money
- g. no matter whether they worked hard or lived idly,

Options:

Option ID: 312846 a

Option ID: 312847 b

Option ID: 312848 c

Option ID: 312849 d

Option ID: 312850 f

Correct Option: 312849

Candidate Response:



Trusted for Success

Question:

This passage consists of jumbled up sentences / parts of sentence. Rearrange the sentences as per the proper order and identify the second sentence after rearrangement.

- a. also, at several places in the desert
- b. A great part of Arabia is desert
- c. The sand is so hot that you cannot walk over it with your bare feet in the daytime
- d. here there is nothing but sand and rock
- e. one can find springs of water
- f. so deep that the sun cannot dry them up
- g. that come from deep down under the ground

Options:

Option ID: 312851 a

Option ID: 312852 c

Option ID: 312853 d

Option ID: 312854 f

Option ID: 312855 g

Correct Option: 312853

Candidate Response:

Question:

This passage consists of jumbled up sentences / parts of sentence. Rearrange the sentences as per the proper order and identify the fourth sentence after rearrangement.

- a. also, at several places in the desert
- b. A great part of Arabia is desert
- c. The sand is so hot that you cannot walk over it with your bare feet in the daytime
- d. here there is nothing but sand and rock
- e. one can find springs of water
- f. so deep that the sun cannot dry them up
- g. that come from deep down under the ground

Options:

Option ID: 312856 a

Option ID: 312857 c

Option ID: 312858 d

Option ID: 312859 f

Option ID: 312860 g

Correct Option: 312856

Candidate Response:

Question:

This passage consists of jumbled up sentences / parts of sentence. Rearrange the sentences as per the proper order and identify the second sentence after rearrangement.

- a. partly according to the climate in which they live
- b. The people of which it is made up
- c. The human race is spread all over the world
- d. and partly according to the kind of food
- e. which their country produces
- f. from the polar region to the tropics
- g. eat different kinds of food

Options:

Option ID: 312861 a

Option ID: 312862 c

Option ID: 312863 d

Option ID: 312864 e

Option ID: 312865 f

Correct Option: 312865

Candidate Response:



Trusted for Success

Q176 | ID: 203046 | Section: VERBAL ABILITY

Question:

Which of the phrases given below the sentence should replace the word/phrase given in bold in the sentence to make it grammatically correct? If the sentence is correct as it is given and no correction is required, select 'No correction required' as your answer.

Vimal had a habit of **pass the buck** when it came to important issues at work.

Options:

Option ID: 312866 pass to bucking

Option ID: 312867 passing buck


Option ID: 312868 passing the buck

Option ID: 312869 pass buck

Option ID: 312870 pass bill

Correct Option: 312868

Candidate Response:



Trusted for Success

Question:

Read the Instructions and answer the question

Out of the given options below, choose the word that is closest in meaning to the word given in capital:

CONVALESCENT

Options:

Option ID: 312871 Convergent

Option ID: 312872 Pertinent

Option ID: 312873 Healing

Option ID: 312874 Acute

Option ID: 312875 Blend



Trusted for Success

Correct Option: 312873

Candidate Response:

Q178 | ID: 203048 | Section: VERBAL ABILITY

Question:

Read the Instructions and answer the question

Out of the given options below, choose the word that is closest in meaning to the word given in capital:

RUMBUSTIOUS

Options:

Option ID: 312876 Antithesis

Option ID: 312877 Slow

Option ID: 312878 Playful

Option ID: 312879 Boisterous

Option ID: 312880 Cheerful



Trusted for Success

Correct Option: 312879

Candidate Response:

Q179 | ID: 203049 | Section: VERBAL ABILITY

Question:

Read the Instructions and answer the question

Out of the given options below, choose the word that is closest in meaning to the word given in capital:

DEBILITATE

Options:

Option ID: 312881 Debate

Option ID: 312882 Disperse

Option ID: 312883 Meditate

Option ID: 312884 Anticipate

Option ID: 312885 Weaken



Trusted for Success

Correct Option: 312885

Candidate Response:

Q180 | ID: 203050 | Section: VERBAL ABILITY

Question:

Read the Instructions and answer the question

Out of the given options below, choose the word that is opposite in meaning to the word given in capital:

DISMAL

Options:

Option ID: 312886 Despair

Option ID: 312887 Cheerful

Option ID: 312888 Trivial

Option ID: 312889 Ordinary

Option ID: 312890 Smiling



Trusted for Success

Correct Option: 312887

Candidate Response:

Q181 | ID: 203051 | Section: VERBAL ABILITY

Question:

Read the Instructions and answer the question

Out of the given options below, choose the word that is opposite in meaning to the word given in capital:

PLIABLE

Options:

Option ID: 312891 Convenient

Option ID: 312892 Easy

Option ID: 312893 Brittle

Option ID: 312894 Arrogant

Option ID: 312895 Rigid



Trusted for Success

Correct Option: 312895

Candidate Response:

Question:

In the given passage, there are words / group of words highlighted in bold and underlined. You have to decide if the words / group of words given is / are correct grammatically and contextually. If not find out the appropriate word / group of words from the given options. In case the given highlighted words / group of words is / are correct, then mark that option as your answer.

Every year over a lakh of our students, seek admissions abroad spending about \$ 4 billion (Rs. 16,400 crore) annually. The **demand in** seats in metros is maddening. Even the less rated institutes are crowded with students. There is an **urgent need** in our country to expand the capacity of higher education. To **link** this huge demand – supply gap, one of the recommendations of the Knowledge Commission is to allow foreign universities in the country. The government it seems is all set to **follow** this recommendation. There is a possibility that the craze for a foreign label and lack of information about these institutes can leave thousands of students duped by fly by night operators, especially the franchisees. The government has to be **skeptical in** allowing entry to foreign universities. Only those institutions that are accredited by reputed organizations should be given permission to set up here

Options:

Option ID: 312896 surge in

Option ID: 312897 rush for

Option ID: 312898 split in

Option ID: 312899 line for

Option ID: 312900 The given and highlighted word(s) is / are correct

Correct Option: 312897

Candidate Response:

Question:

In the given passage, there are words / group of words highlighted in bold and underlined. You have to decide if the words / group of words given is / are correct grammatically and contextually. If not find out the appropriate word / group of words from the given options. In case the given highlighted words / group of words is / are correct, then mark that option as your answer.

Every year over a lakh of our students, seek admissions abroad spending about \$ 4 billion (Rs. 16,400 crore) annually. The **demand in** seats in metros is maddening. Even the less rated institutes are crowded with students. There is an **urgent need** in our country to expand the capacity of higher education. To **link** this huge demand – supply gap, one of the recommendations of the Knowledge Commission is to allow foreign universities in the country. The government it seems is all set to **follow** this recommendation. There is a possibility that the craze for a foreign label and lack of information about these institutes can leave thousands of students duped by fly by night operators, especially the franchisees. The government has to be **skeptical in** allowing entry to foreign universities. Only those institutions that are accredited by reputed organizations should be given permission to set up here

Options:

Option ID: 312901 desperation

Option ID: 312902 rush

Option ID: 312903 imperative

Option ID: 312904 immediate focus

Option ID: 312905 The given and highlighted word(s) is / are correct

Correct Option: 312905

Candidate Response:

Question:

In the given passage, there are words / group of words highlighted in bold and underlined. You have to decide if the words / group of words given is / are correct grammatically and contextually. If not find out the appropriate word / group of words from the given options. In case the given highlighted words / group of words is / are correct, then mark that option as your answer.

Every year over a lakh of our students, seek admissions abroad spending about \$ 4 billion (Rs. 16,400 crore) annually. The **demand in** seats in metros is maddening. Even the less rated institutes are crowded with students. There is an **urgent need** in our country to expand the capacity of higher education. To **link** this huge demand – supply gap, one of the recommendations of the Knowledge Commission is to allow foreign universities in the country. The government it seems is all set to **follow** this recommendation. There is a possibility that the craze for a foreign label and lack of information about these institutes can leave thousands of students duped by fly by night operators, especially the franchisees. The government has to be **skeptical in** allowing entry to foreign universities. Only those institutions that are accredited by reputed organizations should be given permission to set up here

Options:

Option ID: 312906 **orchestrate**

Option ID: 312907 **manipulate**

Option ID: 312908 **bridge**

Option ID: 312909 **align**

Option ID: 312910 **join**

Correct Option: 312908

Candidate Response:

Question:

In the given passage, there are words / group of words highlighted in bold and underlined. You have to decide if the words / group of words given is / are correct grammatically and contextually. If not find out the appropriate word / group of words from the given options. In case the given highlighted words / group of words is / are correct, then mark that option as your answer.

Every year over a lakh of our students, seek admissions abroad spending about \$ 4 billion (Rs. 16,400 crore) annually. The **demand in** seats in metros is maddening. Even the less rated institutes are crowded with students. There is an **urgent need** in our country to expand the capacity of higher education. To **link** this huge demand – supply gap, one of the recommendations of the Knowledge Commission is to allow foreign universities in the country. The government it seems is all set to **follow** this recommendation. There is a possibility that the craze for a foreign label and lack of information about these institutes can leave thousands of students duped by fly by night operators, especially the franchisees. The government has to be **skeptical in** allowing entry to foreign universities. Only those institutions that are accredited by reputed organizations should be given permission to set up here

Options:

Option ID: 312911 oblige

Option ID: 312912 apply

Option ID: 312913 change

Option ID: 312914 understand

Option ID: 312915 The given and highlighted word(s) is / are correct

Correct Option: 312915

Candidate Response:

Question:

In the given passage, there are words / group of words highlighted in bold and underlined. You have to decide if the words / group of words given is / are correct grammatically and contextually. If not find out the appropriate word / group of words from the given options. In case the given highlighted words / group of words is / are correct, then mark that option as your answer.

Every year over a lakh of our students, seek admissions abroad spending about \$ 4 billion (Rs. 16,400 crore) annually. The **demand in** seats in metros is maddening. Even the less rated institutes are crowded with students. There is an **urgent need** in our country to expand the capacity of higher education. To **link** this huge demand – supply gap, one of the recommendations of the Knowledge Commission is to allow foreign universities in the country. The government it seems is all set to **follow** this recommendation. There is a possibility that the craze for a foreign label and lack of information about these institutes can leave thousands of students duped by fly by night operators, especially the franchisees. The government has to be **skeptical in** allowing entry to foreign universities. Only those institutions that are accredited by reputed organizations should be given permission to set up here

Options:

Option ID: 312916 **judicious in**

Option ID: 312917 **envious in**

Option ID: 312918 **discriminatory in**

Option ID: 312919 **flambouyant in**

Option ID: 312920 **proactive in**

Correct Option: 312916

Candidate Response:

Question:

In the following question, a sentence is written in different ways. Choose the sentence that is grammatically correct.

- a) Knowing the area is prone for earthquakes, all the buildings were reinforced with additional steel and concrete.
- b) Since the area was knowing to be prone to earthquakes, all the buildings were reinforced with additional steel and concrete.
- c) Being prone to earthquake, all the buildings were reinforced with additional steel and concrete.
- d) Since the area was prone to earthquakes, all the buildings were reinforced with additional steel and concrete.
- e) As the area was known to earthquakes, all the buildings were reinforced with additional steel and concrete.

Options:

Option ID: 312921 a

Option ID: 312922 b


Option ID: 312923 c

Option ID: 312924 d

Option ID: 312925 e

Correct Option: 312924

Candidate Response:




Trusted for Success

Question:

In the following question, a sentence is written in different ways. Choose the sentence that is grammatically correct.

- a) It must be noted that under no circumstance should the company go in for diversification.
- b) It must be noticed that under no circumstance should the company go in for diversification.
- c) It must be noted that under no circumstance should the company enter for diversification.
- d) It must be noted that under no circumstance should, company go in for diversification.
- e) It must be noted that under no circumstance should the company go in diversification.



Options:

Option ID: 312926 a

Option ID: 312927 b Trusted for Success

Option ID: 312928 c

Option ID: 312929 d

Option ID: 312930 e

Correct Option: 312926	Candidate Response:
-------------------------------	----------------------------

Question:

In the following question, a sentence is written in different ways. Choose the sentence that is grammatically correct.

- a) Some buildings that were destroyed and heavily damaged in the earthquake last year, are constructed in violation of the city's building code.
- b) Some buildings that were destroyed or heavily damaged in the earthquake last year, had been constructed in violation of the city's building code.
- c) Some buildings that are destroyed and heavily damaged in the earthquake last year, were constructed on violation of the city's building code.
- d) The earthquake destroyed some buildings and heavily damaged them last year, these are constructed in violation of the city's building code.
- e) The earthquake destroyed some buildings and heavily damaged them last year because they were constructed in violating the city's building code.

Options:

Option ID: 312931 a

Option ID: 312932 b

Option ID: 312933 c

Option ID: 312934 d

Option ID: 312935 e

Correct Option: 312932

Candidate Response:

Question:

In the following question, a sentence is written in different ways. Choose the sentence that is grammatically correct.

- a) The article tells the story of the famous author and the effective strategy he used to overcome his chronic illness.
- b) The article tells the story of the famous author and the effective strategy he used to overcoming his chronic illness.
- c) These article tells the story of the famous author and the effective strategy he used to overcome his chronic illness.
- d) The article tells the story of the famous author and his effective strategy, he used to overcome his chronic illness.
- e) The article tells the story of the famous author and how his effective strategy helped him to overcoming chronic illness.

Options:

Option ID: 312936 a

Option ID: 312937 b

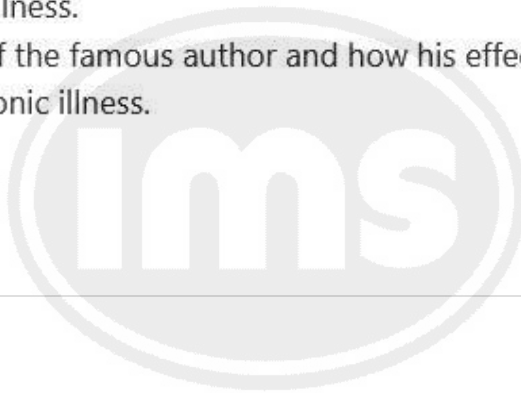
Option ID: 312938 c

Option ID: 312939 d

Option ID: 312940 e

Correct Option: 312936

Candidate Response:




Trusted for Success

Question:

In the following question, a sentence is written in different ways. Choose the sentence that is grammatically correct.

- a) Had this notification been amended earlier, we should have stopped the transfer of funds.
- b) Had this notification been amended earlier, we would have stopped the transfer of funds.
- c) Had this notification have been amended earlier, we would have stopped the transfer of funds.
- d) Were this notification been amended earlier, we would have stopped the transfer of funds.
- e) Should this notification been amended earlier, we would have stopped the transfer of funds.



Options:

Option ID: 312941 a

Option ID: 312942 b

Option ID: 312943 c

Option ID: 312944 d

Option ID: 312945 e

Trusted for Success

Correct Option: 312942

Candidate Response:

Question:

In the following question a phrase of the sentence is printed in bold, find the option which can replace the phrase to make the sentence grammatically correct. If the given sentence is already grammatically correct then choose, 'No correction required' as the option.

The director insisted on his order being carried out **with the letter**.

Options:

Option ID: 312946 for the letter

Option ID: 312947 to the letter

Option ID: 312948 by the letter

Option ID: 312949 into the letter

Option ID: 312950 No correction required



Trusted for Success

Correct Option: 312947	Candidate Response:
-------------------------------	----------------------------

Q193 | ID: 203063 | Section: VERBAL ABILITY

Question:

In the following question a phrase of the sentence is printed in bold, find the option which can replace the phrase to make the sentence grammatically correct. If the given sentence is already grammatically correct then choose, 'No correction required' as the option.

He admired the speed with which Kaushal completed the work and **appreciating the method adopted** by him.

Options:

Option ID: 312951 appreciate the method being adopted

Option ID: 312952 appreciated the method adopted

Option ID: 312953 appreciate the method of adoption

Option ID: 312954 appreciate the adopting method

Option ID: 312955 No correction required

Correct Option: 312952

Candidate Response:

Q194 | ID: 203064 | Section: VERBAL ABILITY

Question:

In the following sentence, the words in bold are gramatically wrong. Choose the option which is grammatically correct and expresses the meaning of sentence correctly.

I asked her **that how she got** time to write all these books.

Options:

Option ID: 312956 that how did she got

Option ID: 312957 that how she was getting

Option ID: 312958 how did she getting

Option ID: 312959 how she got

Option ID: 312960 that how did she get

Correct Option: 312959

Candidate Response:

Question:

Identify the correct sentence from the given options that represents, 'Personification' as a figure of speech.

- A. The wind whispered secrets through the rustling leaves.
- B. The wind was rustling the leaves.
- C. The wind was the lifeline of the wrecked ship.
- D. The wind is a broom, clearing the sidewalk of leaves.
- E. The wind was as sharp as a razor.

Options:

Option ID: 312961 A

Option ID: 312962 B

Option ID: 312963 C

Option ID: 312964 D

Option ID: 312965 E

Correct Option: 312961

Candidate Response:



Trusted for Success

Question:

In this question, four words are given in bold. One of these words given in bold may be wrongly spelt or inappropriate in the context of the sentence.

Find out the word that is inappropriately or wrongly spelt, if any. That word is your answer. If all the words given in bold are correctly spelt or appropriate in the context of the sentence, then mark 'All correct' as your answer.

My heart isn't **simple** or **straightforward**, it's a **complicated mess** of wants and needs.

Options:

Option ID: 312966 **simple**

Option ID: 312967 **straightforward**

Option ID: 312968 **complicated**

Option ID: 312969 **mess**

Option ID: 312970 **All correct**

Correct Option: 312970

Candidate Response:



Trusted for Success

Q197 | ID: 203067 | Section: VERBAL ABILITY

Question:

Identify the correct figure of speech as represented by the given sentence:

"The food tasted awfully good."

Options:

Option ID: 312971 Personification

Option ID: 312972 Metaphor

Option ID: 312973 Exaggeration

Option ID: 312974 Irony

Option ID: 312975 Oxymoron



Trusted for Success

Correct Option: 312975

Candidate Response:

Q198 | ID: 203068 | Section: VERBAL ABILITY

Question:

IDIOM

In the question an idiom is given, select the correct interpretation of the idiom from the given options below

“Throw in the towel”

Options:

Option ID: 312976 To surrender to temptation

Option ID: 312977 To accept defeat

Option ID: 312978 To give up a job

Option ID: 312979 To make a sacrifice

Option ID: 312980 To throw the towel to someone

Correct Option: 312977

Candidate Response:

Q199 | ID: 203069 | Section: VERBAL ABILITY

Question:

IDIOM

In the question an idiom is given, select the correct interpretation of the idiom from the given options below

"Break the ice"

Options:

Option ID: 312981 To start a fight

Option ID: 312982 To solve a difficult problem

Option ID: 312983 To clear misunderstanding

Option ID: 312984 To clear the ice on the road

Option ID: 312985 To overcome social awkwardness

Correct Option: 312985

Candidate Response:

Q200 | ID: 203070 | Section: VERBAL ABILITY

Question:

IDIOM

In the question an idiom is given, select the correct interpretation of the idiom from the given options below

"Play the devil's advocate"

Options:

Option ID: 312986 To argue that something bad is coming, even though it's calm right now

Option ID: 312987 To hear news of something that is a secret

Option ID: 312988 To follow a trend, and do what everyone else is doing

Option ID: 312989 To defend the guilty person by arguing on his behalf

Option ID: 312990 To argue the opposite of what you believe, just for the sake of argument

Correct Option: 312990

Candidate Response: