



eVidyaloka

To Educate - Anywhere Anytime

Worksheet No. 3

Karnataka

STATE BOARD

AUTHOR: Varsha R Jenni

CLASS: 5

LESSON: Decimal Fractions

No of hours taken: 5

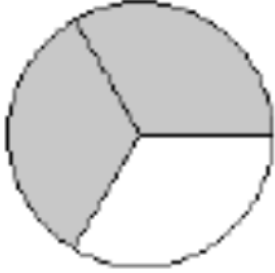
DATE OF CREATION: 7/03/2021

SUBJECT: Maths

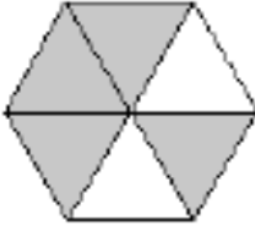
TOPIC: Wholes and parts

1) ಆಕಾರಗಳ ಮಬ್ಬಾದ ಭಾಗದಲ್ಲಿ ಯಾವ ಭಿನ್ನರಾಶಿಗಳನ್ನು ನಿರೂಪಿಸಲಾಗಿದೆ

a.

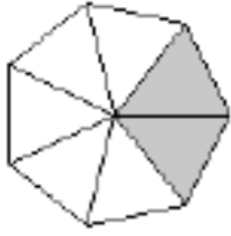


b.

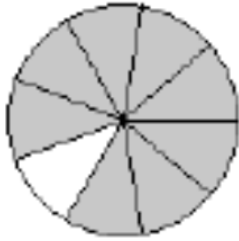




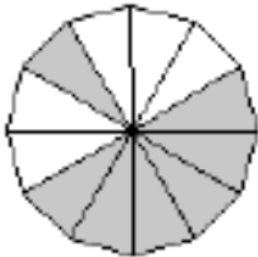
c.



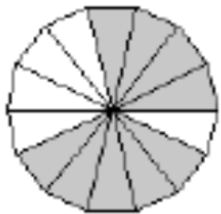
d.



e.



f.





eVidyaloka

To Educate - Anywhere Anytime

2) ಪ್ರತಿ ಆಕಾರದ ಯಾವ ಭಾಗವನ್ನು ಬಣ್ಣ ಮಾಡಲಾಗಿದೆ? ಸರಿಯಾದ ಉತ್ತರವನ್ನು ವೃತ್ತಿಸಿ

a.



$\frac{1}{4}$ $\frac{1}{2}$ $\frac{4}{7}$ $\frac{1}{6}$

b.



$\frac{1}{2}$ $\frac{1}{7}$ $\frac{1}{3}$ $\frac{1}{4}$

c.



$\frac{1}{4}$ $\frac{2}{4}$ $\frac{3}{4}$ $\frac{4}{4}$



eVidyaloka

To Educate - Anywhere Anytime

d.



$\frac{1}{3}$

$\frac{2}{3}$

$\frac{2}{6}$

$\frac{1}{6}$

e.



$\frac{2}{3}$

$\frac{2}{4}$

$\frac{1}{3}$

$\frac{1}{4}$