



Worksheet No.\_7

Uttarakhand STATE BOARD

**AUTHOR:** Gauri bahadur

**CLASS:** 5th

**LESSON:** Geometry

**DATE OF CREATION:** 24/1/21

**SUBJECT:** Mathematics

**TOPIC:** 3D shapes

1-5 80 60 40 20 0

1) यदि आप 3 डी को देख रहे थे

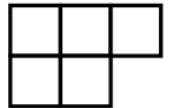
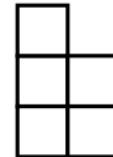
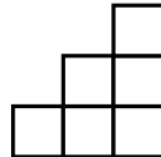
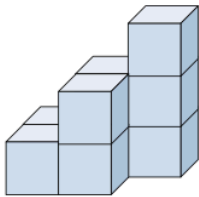
क्या ऊपर से आकार

क्या तुम देखोगे

a)

b)

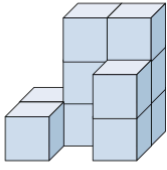
c)



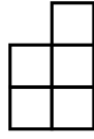
2) यदि आप 3 डी को देख रहे थे

क्या ऊपर से आकार

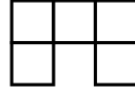
क्या तुम देखोगे?



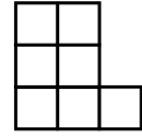
a)



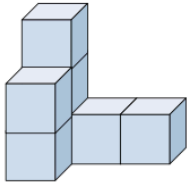
b)



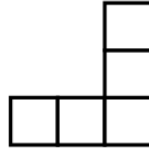
c)



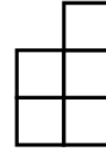
3) यदि आप 3 डी को देख रहे थे  
दाईं ओर से आकार  
तुम क्या देखोगे?



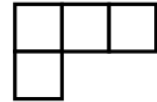
a)



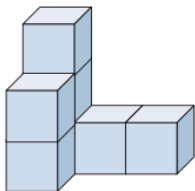
b)



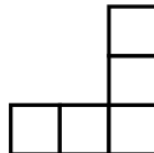
c)



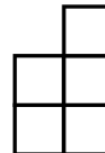
4) यदि आप 3 डी को देख रहे थे  
क्या ऊपर से आकार  
क्या तुम देखोगे?



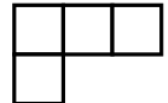
a)



b)

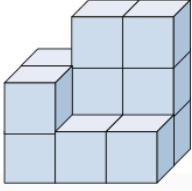


c)

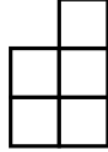




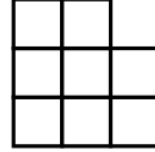
5) यदि आप 3 डी को देख रहे थे  
पीछे से क्या आकार  
क्या तुम देखोगे?



a)



b)



c)

