

St. Mary's School, Dwarka
Practice Worksheet (April-May)

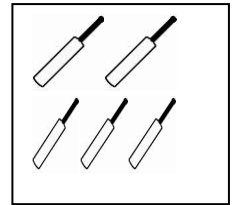
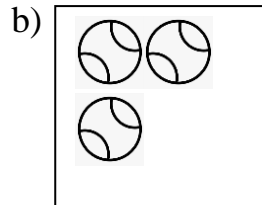


Class: I

Subject: Mathematics

Topic: Ch-1, Numbers 0 to 10


Name: _____ Sec: _____ Date: _____ Roll No: _____

1. Tick (✓) the box which has more number of pictures.

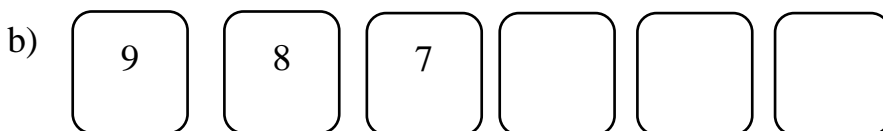
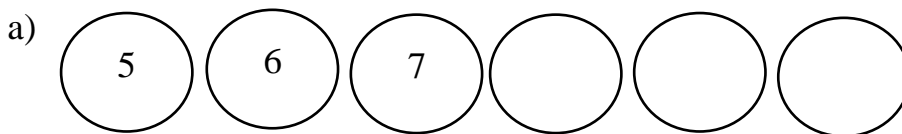


2. Count and write the number names.





3. Fill in the missing numbers.



4. Fill in the missing letter and complete the number names.

a) s _____ v _____ n

d) f _____ v _____


b) t h _____ e

e) n _____ e


c) e _____ g _____ t

f) _____ n _____

5. Match the following.



i) two ()



ii) four ()

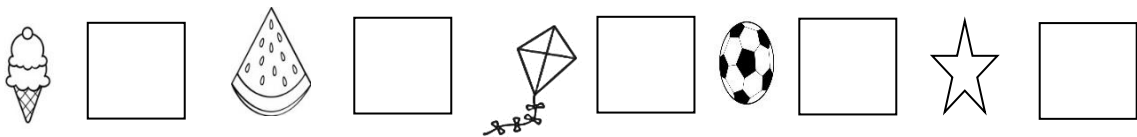



iii) seven ()



iv) three ()

6. Count and write the the total number of each item listed below.



7. Colour the box which has less number of pictures.

