

St. Mary's School, Dwarka
Holiday Homework
Class VII
Week 1
Worksheet 1

Subject: English

Q1. Read the following passage carefully.

Etiquette is the unwritten code that governs social behaviour. Etiquette reflects formulas of conduct in which society or tradition have invested. Western etiquettes tell people to greet friends and acquaintances with warmth and respect, refrain from insults and curiosity, offer hospitality equally to guests, wear clothing suited to the occasion, talk properly, follow good table manners, avoid disturbing others, follow the rules of an organisation, arrive promptly when expected, comfort the bereaved, and respond to invitations promptly.

Violations of etiquettes can cause public disgrace, and in private hurt people's feelings, create misunderstandings or cause real grief and pain.

Some people feel etiquettes to be an unnecessary restriction of freedom of personal expression. However, wearing shorts to a wedding in a Cathedral may be an expression of the guest's freedom, but may also cause the bride and groom to suspect that the guest is expressing amusement or disparagement towards them and their wedding.

Etiquettes are dependent on culture. They can vary widely between different cultures and nations. In China, a person who takes the last item of food from a common plate without offering it to others at the table is seen as a glutton whilst in most European cultures he is expected to eat all the food given to them, as a compliment to cooking. In some societies it is considered disgusting to eat with the left hand, and left-handed individuals are sometimes forced to use their right hand.

On the basis of your reading of the above passage, answer the following questions. (1/2x5=2.5)

1. Choose a suitable title for the above passage.

- a) 'Etiquettes and Manners'
- b) 'Western Etiquettes'
- c) 'Etiquette and Culture'
- d) 'Importance of Culture'

II. Which one of the following statements is **NOT TRUE** according to the passage?

- a) Violation of etiquettes may cause public disgrace.
- b) It may cause shock.
- c) It might hurt other's feelings
- d) It brings joy and happiness.

III. Which word in the passage is opposite in meaning to the word 'restriction'?

- a) limitation
- b) liberation
- c) restrain
- d) constraint

IV. Etiquette and Culture are _____.

- a) dependents
- b) excellent
- c) interdependent
- d) widely different

V. Which word is similar in meaning to the word 'disparagement'?

- a) approve
- b) disgrace
- c) favour
- d) recommend

Q2 You are Anivesh /Anurita Yadav, the Sports Captain of St. Joseph's School, Dehradun. Your school is organizing a workshop on the topic 'The Value of Yoga and Meditation' by an internationally renowned Yoga instructor for the students of Classes VI-VIII. Draft a notice in about 50 words for the same including the necessary details. Also inform the students that they can come up with their queries only after the workshop is over. Put the notice in a box. (2)

Q3. You are Mayank/Mehak residing at 23 A, Dayal Bagh Colony, Hyderabad. Write a letter to your best friend inviting him/her to celebrate one of your favourite festivals at your house. Also tell her/him how to plan to celebrate it. (3)

Q4. "Water is life's matter and matrix, mother, and medium. There is no life without water." -**Emerson**

Design a poster on the topic 'Save Water' on an A/4 sheet. Make your poster colourful and attractive. Write relevant slogans and quotes also. (3)

Q5. Choose the correct option to fill in the blanks.

(1/2 x 5=2.5)

(i) Monica is waiting for her friend _____.

- a) impatient
- b) patient
- c) impatiently
- d) none of the above

(ii) She turned up for the picnic _____.

- a) unexpected
- b) unexpectedly
- c) expected
- d) most expectedly

(iii) I cannot ask Simone to lend me money. I _____ know her.

- a) hard
- b) harder
- c) hardly
- d) forever

(iv) The speckled tortoise walks _____ towards his goal.

- a) speckled
- b) steadfastly
- c) towards
- d) goal

(v) It rained _____ for the next few days.

- a) continuity
- b) continual
- c) continuously
- d) continuedly

Q6. Fill in the blanks with suitable words.

(1/2 x 4 =2)

Most people (a) _____ (think) that the cat (b) _____ (be) an unintelligent animal that (c) _____ (like) to laze around and (d) _____ (do) not care much for anything besides mice and milk. But a cat really has more characters than most human beings. In fact, in the entire animal kingdom, the cat has the most interesting and many-sided character.

Q7. Fill in the blanks with appropriate words.

(1/2 x 4=2)

The solar system consists of the sun and the eight planets that revolve around it. The Sun is the (a) _____ (large/larger/largest) body in this system. Mercury is the (b) _____ (small/ smaller/ smallest) of all the planets. It is also the (c) _____ (near/nearer /nearest) to the Sun. Jupiter is the (d) _____ (big/bigger/biggest) planet.

Q8. Fill in the blanks using the correct form of the verbs given in the brackets.

(1/2 x 4=2)

It (a) _____ (be) a very fine morning on the third day of the chase. A wooden leg (b) _____ (make) quickly to (c) _____ (replace) the lost ivory leg of Ahab. As usual, Ahab again (d) _____ (hoist) up the most in his rope basket. Suddenly, he shouted from the masthead.

Q9. Answer the following question in 100 words.


(3)

Why did the narrator wish to pack the bags himself? Who was Montmorency? What chaos did he create?

Q10. Complete the following puzzle using the hints given below.

(1/2 x 6=3)

LITERARY LINGO PUZZLE



ACROSS

3. a comparison between two dissimilar things without using the words 'as' or 'like'
6. attributing human characteristics to an inanimate object

DOWN

1. words used to imitate the sound associated with something
2. a piece of literary work having three parts
4. a page that includes the author's introduction to the book
5. refers to a unit or group of lines within a poem

PROJECT WORK

You and your friends make a plan to go on a vacation during the summer break. You have been assigned the job of choosing a place for the same. Use 'Google Tour Creator' (<https://arvr.google.com/tourcreator/>) to create the tour of the place that you would like to visit.

You may follow the steps as given: (<https://support.google.com/tourcreator/answer/9010971?hl=en>)

Create your tour:

1. Sign in to **Tour** Creator.
2. Click + **New tour**.
3. Enter a **title**.
4. Enter a **description**.
5. Add a **cover photo**. [Note: Photos must be at least 576 x 432px. (Images can be taken from any search engine.)]
6. Click **create**.
7. After creation, **publish** it (visibility should be public).
8. **Copy** the link and **share** it with your **teacher**.

Subject-Hindi

निर्देश — 1 दिए गए सभी प्रश्नों के उत्तर हिन्दी की उत्तर पुस्तिका में कीजिए।

2 सभी प्रश्नों के उत्तर पूर्ण वाक्य में लिखकर स्थानों को रेखांकित कीजिए।

3 कार्य स्वच्छ, शुद्ध एवं स्पष्ट लेख में कीजिए।

M.M.-25

प्रश्न-1 पक्षी आज़ाद रहकर अपनी कौन-कौन-सी इच्छाएँ पूरी करना चाहते हैं? पक्षियों की पालना उचित है या नहीं? अपने विचार लिखिए। (2)

प्रश्न-2 लेखक बारात में क्यों नहीं जा सका? घर पर होने वाले विवाह-उत्सवों में आपका क्या योगदान रहता है? (2)

प्रश्न-3 पक्षी हम मनुष्यों से क्या प्रार्थना करते हैं? स्वतंत्रता के विषय में आपके क्या विचार हैं? (2)

प्रश्न-4 जब आप अस्वस्थ होते हैं तो आपकी दादी /नानी या आपकी माँ किस प्रकार से आपका ध्यान रखती हैं? (2)

प्रश्न-5 शान्तनु और गंगा के कितने पुत्र थे? गंगा नदी के विषय में जानकारी एकत्रित करके लिखिए। (2)

प्रश्न-6 भीष्म की प्रतिज्ञा से उनके चरित्र की किन विशेषताओं का पता चलता है? क्या आप अपनी की हुई प्रतिज्ञा हमेशा पूरी करते हैं? (2)

प्रश्न-7 निम्नलिखित में भाषा का कौन-सा रूप प्रयुक्त होता है? (3)

भाषण देना, निबंध लेखन, प्रश्नपत्र हल करना, टेलीफोन पर बातचीत, ई-मेल, प्रार्थनापत्र।

प्रश्न-8 रिक्त स्थानों की पूर्ति उचित शब्द से कीजिए— (2)

(क) हिन्दी भाषा को संविधान में को राजभाषा के रूप में स्वीकार किया गया।

(ख) संसार में कुल भाषा परिवार हैं।

(ग) क्षेत्र विशेष में बोला जाने वाला भाषा का रूप कहलाता है।

(घ) घर-परिवार में माता-पिता के साथ बोलकर सीखी जाने वाली भाषा कहलाती है।

प्रश्न-9 'ऑनलाइन कक्षा का अनुभव' विषय पर दो मित्रों के बीच हुई बातचीत को संवाद के रूप में लिखिए। (4)

प्रश्न 10 दिए गए संकेतों के आधार पर कहानी पूरी कीजिए — (4)

किसी गाँव में एक वैद्य का रहना कोई रोगी का न मिलनाउसका रोगी की तलाश में निकलनाजंगल पहुँचकर एक पेड़ के खोखल में एक साँप को देखना वहीं कुछ बच्चों का भी खेलना यह सब देखकर वैद्य का सोचना कि यदि मैं किसी बच्चे को साँप से डसवा दूँ तथा फिर इलाज करूँ तो अच्छा पैसा मिल जाएगा बच्चों से साँप को मैना के बच्चे बताकर पकड़ने के लिए कहना एक बच्चे का वैद्य की बातों में आकर पेड़ पर चढ़ना बच्चे का खोखल में हाथ डालना साँप फँकना साँप का वैद्य को डसना वैद्य को अपनी करनी का फल मिलना।

शिक्षा।

Subject- Mathematics

Q1: Find the value of the following :

(a) $80 \div (-5)$ (b) $-64 \div (-16)$ (1)

Q2: Evaluate the following :

(a) $(-6) \times (-4) \times (-12)$ (b) $3 \times (-15) \times 0 \times (-5)$ (1)

Q3: Find the perimeter of a regular hexagon with each side measuring 8 m. (1)

Q4: Write 0.066 as fraction in lowest terms. (1)

Q5: Fill in the blanks with suitable sign ($<$, $>$ or $=$) :

(a) $(-35) - (-43)$ $-43 - (-35)$

(b) $-58 + (-14)$ $-65 + 13$ (2)

Q6: The temperature at a place rises from -20°C to 20°C . What is the rise in temperature? (2)

Q7: Solve the following:

(a) $(-8) \times (-5) + (-6)$

(b) $(-5) \times [(-6) + 5]$ (2)

Q8: Using number line, find the following:

(a) $-6 + 7$ (b) $4 + (-8)$ (2)

Q9 (a): What should be added to -211 to get 195 ? (2)

(b): Arrange the following integers in descending order:

(i) $-112, 120, 165, -150, 0, -165$

(ii) $115, -151, -201, 125, -226, 242$ (2)

Q10: (i) John withdrew ₹ 1175.75 from his bank account. Now he has ₹ 4450.25 left in his account.

What was the original balance in his account before the withdrawal? (2)

(ii) The sum of three decimals is 450.63. What is the third decimal, if two of them are 126.53 and 95.54?

Q11 (a): In a ΔABC , if $\angle A = 72^{\circ}$ and $\angle B = 63^{\circ}$, then find $\angle C$. (2)

(b): One of the exterior angles of a triangle is 80° and the interior opposite angles are equal to each other. What is the measure of each of these two angles ? (2)

Q12: Add the following fractions:

$\frac{7}{12}$, $\frac{5}{16}$ and $\frac{9}{24}$ (2)

Q13: Represent the following fractions on a number line:

(a) $\frac{1}{5}$ (b) $\frac{3}{5}$ (2)

Q14: Represent 1.3, 3.8 and 4.1 on the number line. (2)

Q15: Compare the following fractions:

(a) $\frac{4}{5}$ and $\frac{5}{6}$ (b) $\frac{3}{4}$ and $\frac{2}{5}$ (3)

Q16: Find the value of the following:

(a) $15 - 9.363$

(b) $5.28 - 1.4 + 3.116$ (3)

Q17: A rectangular park is 30 metres long and 20 metres broad. A steel wire fence is put up all around it. Find the cost of putting the fence at the rate of ₹15 per metre. (3)

Q18: A man has ₹ 20,000 in his account in a bank. He withdraws ₹ 3000 per month for the first two months and deposits double of this amount in third month. What will be the balance in his account after 3 months? (3)

Q19: A diver descends 20 feet in the water from the boat at the surface of a lake. He then rose 12 feet and descends another 18 feet. At this point what is his depth in water? (3)

Q20: Find the ratio of the following in the simplest form:

(i) 75 paise to Rs 3

(ii) 3 m 5 cm to 35 cm

(iii) 48 min to 2 hours 40 min

(iv) 8 kg to 400 gm (4)

Projects

Prepare a power point presentation on the topic 'Symmetry' covering the following points:

(a) Define of symmetry

(b) Line of symmetry

(c) Symmetry in different polygons

(d) Symmetry in alphabets

(e) Applications of symmetry

OR

Collect the data of total runs scored by your favourite player in your favourite IPL team in last 5 years and represent the data using bar graph by choosing an appropriate scale.

Subject: Science

Objective:

- Revision of concepts.
- Skills to carry out research and develop scientific aptitude.
- Encouraging learning through experience.

Instructions:

- Neatly write all the answers in your Science note book.
- Attempt the questions keeping in mind the weightage of each question.
- Assignment 'Summer Holiday Homework' will be created on TEAMS. PDF of handwritten work should be uploaded on it.

Answer the following questions:

1. Some plants have leaves that do not appear green. Where does the photosynthesis takes place in such plants? (1)
2. How does water reach the leaves from the soil? Explain. (1)
3. What are the small openings present on the lower surface of a leaf called? Mention their function. (2)
4. Potato and ginger are both underground parts of the plant that store food. Where is the food prepared in these plants? (2)
5. Identify the given plant. How does it get its nutrition? (2)



6. What is a lichen? What kind of relationship do lichens exhibit? (3)
7. Why does the wheat dough left in the open for few days starts to emit foul odour. How can you preserve the quality of the wheat dough? (3)
8. Nitrogen is an essential nutrient for plant growth. Why do farmers who cultivate pulse crops like green gram, black gram, etc. do not use nitrogenous fertilizers during cultivation? (3)
9. You must have seen the yellow wire like structures growing on other plants. They are without leaves and lack chlorophyll.
 - a) Name the plant.
 - b) How do these plants get their nutrition?
 - c) What happens to the plant on which they grow? (3)
10. During the rainy season, Radhika noticed that her mother was very busy cleaning and keeping things safe from the fungus attack. On seeing this Radhika also started helping her mother.
 - (a) What is fungi?
 - (b) What is the mode of nutrition in fungi?
 - (c) Why do fungi appear during rainy season?
 - (d) How can we protect our things from the attack of the fungus? (5)

Subject: Social Science

General Instructions:

- The work should be done neatly and in a systematic way.
- The given worksheets are to be done in S.St (red) notebook.
- Mention the number of worksheet while doing the work.
- Write questions along with the answers and number them correctly.
- Questions 1-6 are to be answered in 10 to 30 words.
- Questions 7-9 are to be answered in 60 to 80 words.
- Question 10 is to be answered in 80-120 words.
- Project Work needs to be answered accordingly.

Worksheet 1 History

Answer the following questions:

Max Marks: 20

Q1. What did 'Hindustan' stand for in the medieval period?

1



Q2. Name any four types of literary sources.

1

Q3. Mention the centuries which marked the beginning and the end of the medieval period.

1

Q4. Why do you think our information about the medieval period is much more than the ancient period?

1

Q5. Who wrote Humayunnama? What does it tell us about?

1

Q6. List the two most important autobiographies of the medieval period.

1

Q7. What are archaeological sources? How are they important for the study of history?

3

Q8. How do the travelogues help the historians to reconstruct history?

3

Q9. Discuss any three major historical developments during the medieval period.

3

Q10. Describe court chronicles. Mention any four important chronicles of the medieval period.

5

Worksheet 1 Civics

Answer the following questions:

Max Marks: 20

- Q1. Name the two principles on which democracy is based. 1
- Q2. Why do you think village panchayat is a direct form of democracy? 1
- Q3. Explain the term *elections*. 1



- Q4. What is Universal Adult Franchise? 1
- Q5. List any two essential conditions for the successful working of a democratic government. 1
- Q6. What is public opinion? 1
- Q7. How do the citizens of a democratic country participate in forming their government? 3
- Q8. Social and economic equality are the core values of democracy. Comment 3
- Q9. Explain the following: 3
- a) Democratic society
 - b) Rule of law
- Q10. Define 'democracy'. Enumerate the difference between the following along with the examples 5
- i) direct democracy and representative democracy
 - ii) absolute monarchy and dictatorship

Worksheet 1 Geography

Answer the following questions:

Max Marks: 20

- Q1. When and why is the Earth Day celebrated? 1
- Q2. 'Earth is a fascinating and an extraordinary planet'. Why? 1



- Q3. What do you understand by biotic and abiotic components of the environment? 1
- Q4. List any two reasons for environmental pollution. 1
- Q5. Why is lithosphere important for the progress of human beings? 1
- Q6. Which is the lowest and the topmost layer of the atmosphere?



- Q6. Explain the given terms: 3
- a) Ecosystem b) Environment
- Q7. Explain the different domains of the Earth with the help of a diagram. 3
- Q8. Enumerate the difference between man-made environment and natural environment. 3
- Q9. Discuss the major components of our environment with the help of a G.O. Give examples for each. 5

Project Work



The journey of a river is often compared to the life of a human being. Imagine you are a river. Prepare a scrap file/ S.St notebook and write about your life & your experiences. Paste pictures if possible. Include the given points:

- On a physical map of India/world mark the places of your origin (birth place), places that you flow through (visit/visited).
- Features you have formed in the different stages of your life (your growth, people you met. friends, likes /dislikes, hurdles, achievements, accomplishments etc.)
- The changes in the society (Government policies, economy, provision of civic amenities etc.)
- Environment that you have witnessed through the years (climatic change, pollution etc.)

Subject- Sanskrit

सामान्य निर्देश - 1 प्रदत्त प्रश्नानाम् उत्तराणि संस्कृतस्य उत्तर पुस्तिकायाम् लिखत।

M.M-25

2 सर्वेभ्यः प्रश्नानाम् उत्तराणि पूर्णवाक्येन लिखित्वा रिक्तस्थानम् .
रेखांकितम् कुरुत।

3 कार्य स्वच्छ ,शुद्ध एवं स्पष्ट रूपेण लेखनीय।

1 दिए गए प्रश्नों के उत्तर संस्कृत की उत्तर पुस्तिका में लिखिए।

2 सभी प्रश्नों के उत्तर पूर्णवाक्य में लिखकर रिक्त स्थानों को रेखांकित कीजिए।

3 कार्य स्वच्छ ,शुद्ध एवं स्पष्ट लेख में कीजिए।

प्रश्न 1 अधोलिखितं गद्यांशं पठित्वा प्रश्नान् उत्तरत -

(5)

गृहस्य अग्रेभागो एकम् उद्यानम् अस्ति। उद्यानम् सुन्दरम् अस्ति। उद्याने विविधाः वृक्षाः पादपाः लताः च सन्ति। वृक्षाः मधुराणि फलानि यच्छन्ति। अत्र आम्रवृक्षाः सन्ति। आम्रवृक्षे पिकः तिष्ठति। पिकः मधुरं गीतं गायति। मयूरः नृत्यति। पादपेषु लतासु च पुष्पाणि विकसन्ति। पुष्पेषु सुगन्धिः भवति। अतः पुष्पेषु भ्रमराः तिष्ठन्ति। ते पुष्पाणां रसं पिबन्ति मधुरेण स्वरेण च गुर्रन्ति। शुद्धः पवनः वहति। आकाशे खगाः उड्डयन्ति। अत्र एकः सरोवरः अस्ति। सरोवरे हंसाः तरन्ति। उद्याने एका बालिका क्रीडति। जनाः भ्रमन्ति। सर्वे त्र हरीतिमा सन्ति। एतत् मनोहरं दृश्यम् दृष्ट्वा मनः प्रसन्नः भवति।

1 एक पदेन उत्तरत -

(क) आम्रवृक्षे कः तिष्ठति ?

(ख) पादपेषु लतासु च कानि विकसन्ति ?.

2 पूर्णवाक्येन उत्तरत -

(क) पिकः किम् गायति ?

3 निर्देशानुसारेण उत्तरत -

(क) 'भवति' इति क्रियापदस्य धातुः पुरुषः च लिखत।

(ख) वृक्षाः इति पदस्य अर्थम् लिखत।

प्रश्न 2 चित्रं दृष्ट्वा दत्तपदानां सहायतया रिक्तस्थानानि पूरयत -

(2)

मञ्जूषा — खेलनाय , बालकः , गच्छति , क्रीडति।



- 1 अस्मिन् चित्रे एकः _____ अस्ति ।
- 2 सः क्रीडाक्षेत्रम् _____ ।
- 3 सः _____ तत्र गच्छति ।
- 4 सः हॉकी क्रीडति ।

प्रश्न 3 अधोलिखिते संवादे मञ्जूषायाः उचितपदानि चित्वा रिक्तस्थानानि पूरयत - (2)

मञ्जूषा - शिक्षकः, अष्टमी, किम्, दिपेशः ।

- मयंकः - तव नाम [1]----- अस्ति ?
 दिपेशः - मम नाम [2]----- अस्ति ।
 मयंकः - तव पिता किं कार्यम् करोति ?
 दिपेशः - मम पिता [3]----- अस्ति ।
 मयंकः - तव भ्राता कस्यां कक्षायाम् पठति ?
 दिपेशः - मम भ्राता [4]----- कक्षायाम् पठति ।

प्रश्न 4 धातु रूपाणि लिखत - (2)

- क) 'गम्' धातु - लृट् लकारः, प्रथम पुरुषः ।
 ख) 'पठ्' धातु - लट् लकारः, उत्तम पुरुषः ।

प्रश्न 5 शब्द रूपाणि लिखत - (2)

- क) 'बालक' शब्द द्वितीया विभक्तिः ।
 ख) 'बालिका' शब्द पंचमी विभक्तिः ।

प्रश्न 6 कोष्ठके प्रदत्तैः उचित संख्या पदैः रिक्तस्थानानि पूरयत - (2)

- 1 गृहे ----- बालकौ खेलतः । (2)
- 2 मञ्चे ----- कलमानि सन्ति । (18)
- 3 उद्याने ----- वृक्षाः सन्ति । (20)
- 4 वृक्षे ----- काकाः उपविशन्ति । (9)

प्रश्न 7 मञ्जूषायां प्रदत्तैः उचित समय बोधक शब्देन रिक्तस्थानानि पूरयत - (2)

मञ्जूषा - सप्तवादनम्, सार्धनवादनम्,
 सार्धचतुर्वादनम्, दशवादनम् ।

- 1 अहम् प्रातः ----- (7: 00) वादने उत्तिष्ठामि ।
- 2 अहम् प्रातः ----- (10: 00) वादने पठामि ।
- 3 अहम् सायम् ----- (4: 30) वादने खेलामि ।
- 4 अहम् रात्रौ ----- (9: 30) वादने शयनं करोमि ।

प्रश्न 8 मञ्जूषायां प्रदत्तैः उचित अव्ययपदैः रिक्तस्थानानि पूरयत -

(2)

मञ्जूषा - अत्र , अपि , च , अद्य

- 1 राधा रमा ----- खेलतः।
- 2 ----- अवकाशः अस्ति।
- 3 रामः पठति, मोहनः ----- तत्र पठति ।
- 4 अहम् ----- तिष्ठामि।

प्रश्न 9 प्रदत्तान् शब्दान् समुचित तालिकायां स्थापयत -

(2)

बालकौ , गजाः , मेघः , मित्रे , पुस्तकानि , धाविका , गायिके , सैनिकाः ।

एकवचनम्

द्विवचनम्

बहुवचनम्

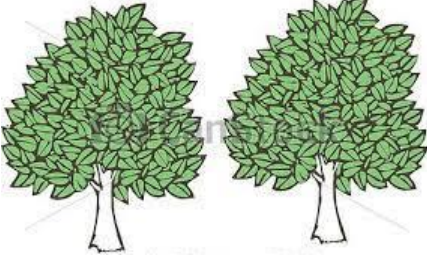
.....

.....


.....

प्रश्न 10 चित्रम् दृष्ट्वा शुद्धेन विकल्पेन उत्तरत -

(4)



क) वृक्षाः ख) वृक्षौ ग) वृक्षः।



क) अश्वः ख) अश्वाः ग) अश्वी।



क) कमलानि ख) कमलम् ग) कमलै।



क) बालिका ख) बालिके ग) बालिकाः।

Subject: Computer Science

Lesson 1- Introduction to HTML

Lesson 2 – Creating web pages using HTML

Instructions:

- All the subjective questions to be solved on a ruled sheet. Scan the sheet and save it as a pdf file. The Filename should be **Student name – HTML SHHW. Eg:- shristy -HTML SHHW.**
- All the practical and project-based homework to be uploaded under **Assignments** in **Microsoft Teams.**
- Take the screenshot of the HTML code and the output shown in the Internet Explorer. Paste it in the Word file. Save the file with your name in the PDF format. **Student name – HTML Practical.**

Eg:- shristy -HTML Practical

1. Fill in the blanks: -

$\frac{1}{2} * 6 = 3$

- a) An _____ is a special word used inside a tag to specify additional information.
- b) _____ tag is used for inserting line breaks.
- c) The comment tag is indicated by an _____.
- d) By default, _____ bullet is used as an unordered list.
- e) _____ are pages of content in digital form that makes a website.
- f) The most important factors of website designing are _____, _____ and _____.

2. Correct the following statement: -

$1 * 3 = 3$

- a) Title tag is used within body tag.
- b) HTML recognizes carriage return.
- c) The closing tag is indicated by a \ (backward slash).

3. Differentiate between the following:

$2 * 3 = 6$

- a) Container tags and Empty tags
- b) Ordered and Unordered list
- c) Paragraph and line breaks

4. Answer the following questions: -

$2 * 4 = 8$

- a) Mention the syntax rules required to be followed while writing html tags.
- b) Define the following:
 - i) Hyperlink
 - ii) Source code
- c) Explain the different types of HTML documents?

d) Write a short note on HTML.

5. Practical Based Questions: -

5

1. Create an HTML page to show the effect of paragraph tag, bold tag, italic tag and underline tag.

Machine Language

Assembly Language

High Level Language

Natural Language

2. Apply ordered list to display the list of items as shown below.

- a. Printer
- b. Joystick
- c. Hard Disk

3. Apply unordered list to display the list of items as shown below.

- ATM
- UMANG
- myGOV
- BHIM

6. Project Based Questions: -

5

Create five bookmarks using the www.canva.com online application on the topics mentioned below.

- a) International Autism Day
- b) National Pet Day
- c) World Heritage Day
- d) Earth Day
- e) Labour Day
- f) Mother's Day

Apply the effects, filters, and animation to both the text and the bookmark. Add music to all the bookmarks.

Download the bookmark video in the .mp4 format.