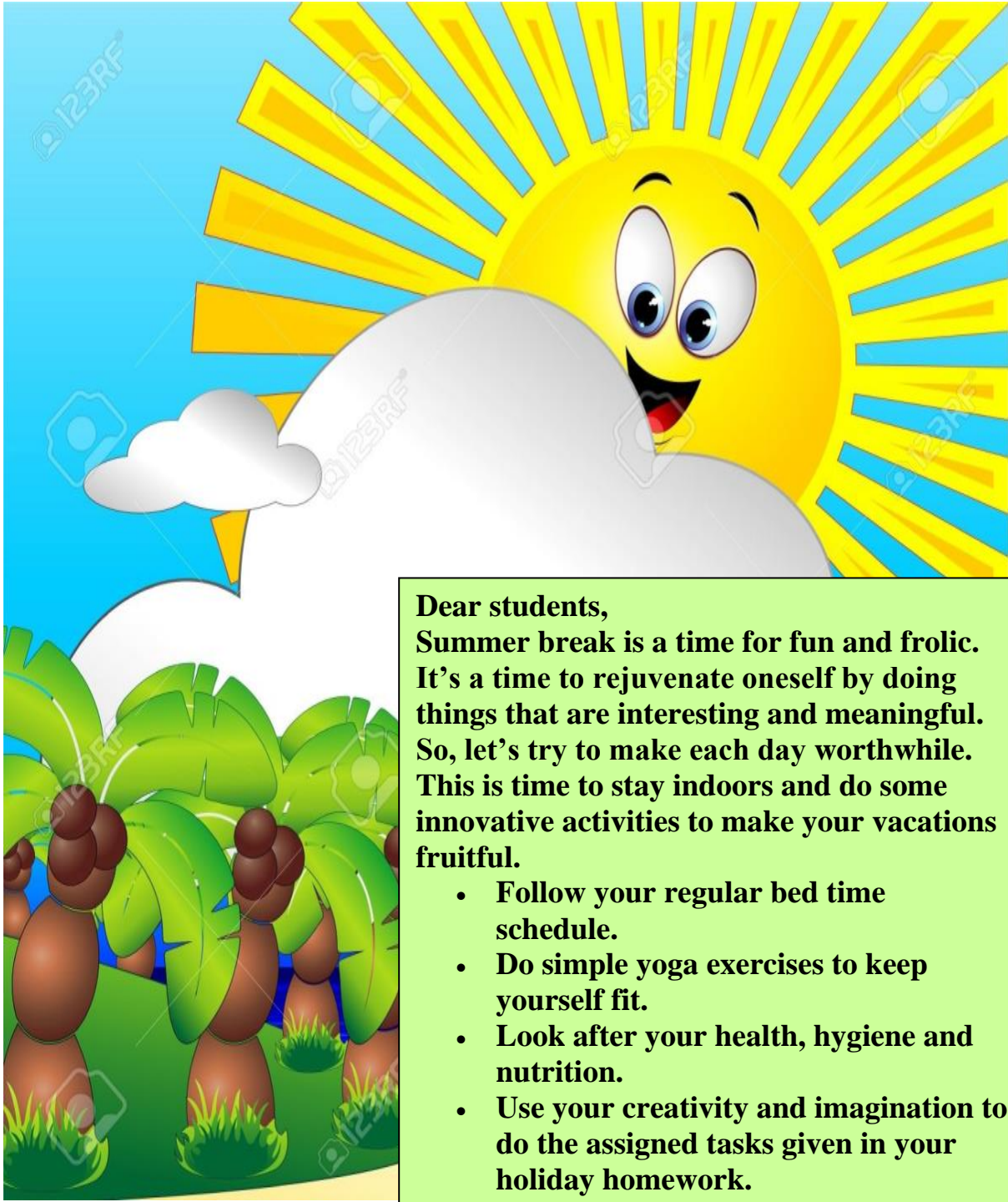


**HOLIDAY HOMEWORK
CLASS III (2021-22)**



**Dear students,
Summer break is a time for fun and frolic.
It's a time to rejuvenate oneself by doing
things that are interesting and meaningful.
So, let's try to make each day worthwhile.
This is time to stay indoors and do some
innovative activities to make your vacations
fruitful.**

- **Follow your regular bed time schedule.**
- **Do simple yoga exercises to keep yourself fit.**
- **Look after your health, hygiene and nutrition.**
- **Use your creativity and imagination to do the assigned tasks given in your holiday homework.**

Art integrated Interdisciplinary project

Topic- A home for everyone.

English-What comes to your mind when you hear the word 'home'? Why do we need a home?

Compose a short poem on your dream home on an A4 size sheet.

Science- Design a beautiful garden for your dream home and draw a picture of that garden on an A4 sheet.

Write the names of five flowering plants that you would like to grow in your garden.

Maths-Google and collect the information about the cost of each flowering plant you want to have in your dream garden. If you want to grow 5 such plants, of each type in your garden, calculate the cost you will spend on your dream garden.

Hindi- एक A4 साइज शीट पर बगीचे का एक दृश्य बनाएँ I उसे बगीचे के एक पेड़ पर, अपने घोंसले में बैठी दो चिड़ियाँ आज की परिस्थिति पर बात कर रही हों कि, कोरोना से बचने के लिए मनुष्य का घर पर रहना कितना आवश्यक है I यह वार्तालाप उसी A4 शीट पर लिखे I

Social Science- Draw a picture of Kuccha house (mud house) and Pakka house (cement house) and write five points of difference between them.

English

Q. Make a character web about Mala from the story ‘Mala goes to school’. Write 3 things she does. For each action, write a sentence about what the action tells you about Mala.



Lets try this quiz!

Click on the given link to attempt the quiz-

<https://quizizz.com/admin/quiz/5efc6cf148341b001b10db67/mala-goes-to-school>

Q2 Read the given comprehension and answer the questions based on it-

Food can maintain and save life. It can destroy life as well. Proper food serves as medicine, improper food works as poison. A little care about the quality and quantity of food will keep us healthy and happy. If we go about eating all sorts of things, we shall become sick.

We take pride in calling ourselves civilized. Being sensible means to know the difference between good and bad, right and wrong. It will not become slaves to our tongue or taste. Even cattle, birds and beasts eat only what is best for their body.

We mostly eat processed food and refined sugar. We pay heavily for junk food, for Chinese dishes or deep fried snacks. As a result we catch diseases. We have drifted away from mother nature. We laugh at the rules of hygiene, healthy diet and the advice of our elders. This has given rise to diabetes.

We offer chocolates, cakes and ice creams too often to our children. We also attend parties or dine out every day. This way we invite obesity and diabetes.

Q. Answer the following questions briefly:


- (a) What are the functions of food?
- (b) What is meant by 'improper food'?
- (c) What does 'civilised life' imply?
- (d) Explain: We have drifted away from nature.

Q. Find words from the passage that mean the same as:

- (a) being fat
- (b) cleanliness

Maths

Fun with Numbers



Rahul has a locker that opens with a password of numbers

You have to help him because he has forgotten the combination

Fortunately, he remembers some things about the numbers, which may help you to assist him.

- The number has three digits
- All the digits are different
- It begins and ends with an odd number and has an even number in the middle
- Odd number at the hundreds place is more than zero and less than 2.


- Odd number at ones place is the biggest one digit number.
- Even number in the middle is more than 5 and less than 7.

WHAT IS THE NUMBER THAT WILL OPEN THE SAFE ?

THE NUMBER IS _____

Quick Recap of the Chapter Place Value

Answer the following questions:-



1. Write the expanded form of 7358

2. Write the successor 8965 _____
3. 4424 is odd or even? _____
4. Place value of the digit 8 in 3890 is _____
5. Face value of the digit 4 in 842 is _____
6. Form the greatest 4 digit number using 5 , 9, 1,7 _____
7. Form the smallest 4 digit 4 digit number using 0,8,3,6 _____
8. Write predecessor of 9241 _____
9. What is greatest 6878 or 6697? _____
10. Round off 6736 to the nearest 10 _____
11. 10 more than 3000 is _____
12. Sum of smallest 2 digit number and largest 2 digit number is

13. Arrange the following numbers in descending order and ascending order

6705, 8736, 6759, 8725, 6744

Find the Mystery Number

1) 6 in the Thousands Place
4 in the Tens Place
6 In Ones Place
7 in Hundreds Place
What is the Mystery Number? _____



2) 2 in the Thousands place
3 in the Tens Place
0 in Hundreds Place
8 in Ones Place
What is the Mystery Number? _____

3) 1 in the Ones place
3 in the Hundreds Place
4 in Thousands Place
6 in Tens Place
What is the Mystery Number? _____

4) 6 in the Hundreds Place
6 in the Thousands Place
7 in Ones Place
8 in Tens Place
What is the Mystery Number? _____

5) 4 in the Thousands place
5 in Tens Place
6 in Ones Place
7 in Hundreds Place
What is the Mystery Number? _____

6) 9 in the Thousands Place
0 in the Tens Place
6 In Ones Place
0 in Hundreds Place
What is the Mystery Number? _____

7) 4 in the Thousands Place
1 in the Tens Place
0 In Ones Place



0 in Hundreds Place
What is the Mystery Number? _____

8) 5 in the Thousands Place
4 in the Tens Place
0 In Ones Place
1 in Hundreds Place
What is the Mystery Number? _____

Science

Tracing a Leaf Block -1


Take any leaf put it under the page and rub a crayon over it. Draw its outline and label different parts of a leaf



Let's widen our knowledge about leaves

Draw or paste a picture of the leaves mentioned below and write the kind of leaf it is. One has been done for you.

Read Block1 thoroughly from the content book and revise the work done in the workbook.

S. no	Name of the Leaf	Drawing of the leaf	Simple, Compound or Double compound
1.	Spinach		Simple leaf
2.	Tulsi		
3.	Neem		
4.	Coriander		
5.	Curry Leaves		
6.	Mint		

हिंदी ग्रीष्मावकाश गृह कार्य

1) गद्यांश पढ़कर पूछे गए प्रश्नों के उत्तर दीजिए

एक राजा को पशु-पक्षियों को पालने का बहुत शौक था। उसने एक बंदर भी पाल रखा था। राजा के मंत्रियों को भय था, कि बंदर में बुद्धि कम होती है, अतः वह बंदर कभी भी राजा को हानि पहुँचा सकता है, पर राजा ने किसी की एक न सुनी। वह बंदर भी समझदार और स्वामिभक्त था। एक दिन राजा को नींद आ गई, तो बंदर राजा को हवा करने लगा। बंदर को पंखा करते देख मंत्रीगण और नौकर-चाकर चकित रह गए। तभी बंदर ने देखा कि एक मक्खी बार-बार उड़कर राजा की नाक पर बैठ रही है। बंदर ने कई बार मक्खी को उड़ाने का प्रयत्न किया, पर हर बार वह पुनः राजा की नाक पर बैठ जाती। गुस्से में आकर बंदर ने तलवार निकाल ली और जैसे ही मक्खी राजा की नाक पर बैठी, बंदर ने उस पर तलवार से वार किया। मक्खी तो उड़ गई, पर राजा की नाक कट गई।

प्रश्न1- राजा का शौक क्या था?

प्रश्न2- मंत्रियों को बंदर से किस बात का भय था?

प्रश्न3- राजा द्वारा पाला गया बंदर कैसा था?

प्रश्न4- राजा के मंत्रीगण और नौकर-चाकर किस बात को देखकर चकित रह गए?

प्रश्न5- गुस्से में बंदर ने क्या किया?

2) दिए गए वर्गों को पूरा करें :-

क	ख	_____	_____	ङ
च	_____	ज	_____	ञ
ट	_____	ड (ड़)	ढ (ढ़)	ण
त	थ	_____	ध	_____
प	_____	ब	_____	म
_____	र	ल	व	
श	ष	_____	ह	

3) स्वर और व्यंजन छाँटकर अलग-अलग करें: -

अ च म इ प ओ त ल ऐ श न आ उ ऋ

स्वर

व्यंजन

Social science

Q1. Look at the picture and describe why taking care of elderly is important?



3. Find out the names of any 10 rivers of India from the given word box and write in the space provided.



Happy

Holidays !

